





Name : _____

TRIP TO ZOO

Sheet 3

Mrs. Maria's class went on a field trip to the zoo. She asked the kids to vote for their favorite animal and recorded the results in a tally chart. Use the tally chart to answer the questions.

Animals	Tally Marks
 <p>Tiger</p>	
 <p>Giraffe</p>	
	
	

PREVIEW

Gain complete access to the largest collection of worksheets in all subjects!

Members, please log in to download this worksheet.

Not a member? Please sign up to gain complete access.

www.mathworksheets4kids.com

- 1) Which animal was most popular? _____
- 2) How many kids voted for the tiger? _____
- 3) Were there animals with equal votes?
If yes, name the animals. _____
- 4) Which animal was most popular? _____
- 5) How many kids voted in all? _____







Name : _____

Answer Key

TRIP TO ZOO

Sheet 3

Mrs. Maria's class went on a field trip to the zoo. She asked the kids to vote for their favorite animal and recorded the results in a tally chart. Use the tally chart to answer the questions.

Animals	Tally Marks
 <p>Tiger</p>	
 <p>Giraffe</p>	
	
	

PREVIEW

Gain complete access to the largest collection of worksheets in all subjects!

Members, please log in to download this worksheet.

Not a member? Please sign up to gain complete access.

www.mathworksheets4kids.com

- 1) Which animal was most popular? **deer**
- 2) How many kids voted for the giraffe? **4**
- 3) Were there animals with equal votes?
If yes, name the animals. **Yes, giraffe and elephant**
- 4) Which animal was most popular? **tiger**
- 5) How many kids voted in all? **40**