


Shading Thermometer


DS1

Shade the thermometer to show the temperature.


1) -9°C




2) 41°C




3) -48°C



4) -20°C



5) 24°C



PREVIEW

Access the largest collection of
worksheets for just **\$19.95** per year!

Members, please
log in to
download this
worksheet.


Log in

Not a member?
Please sign up to
gain complete
access.

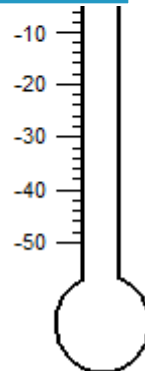
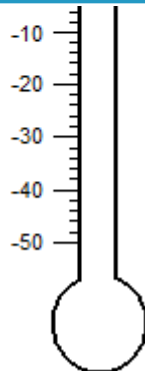
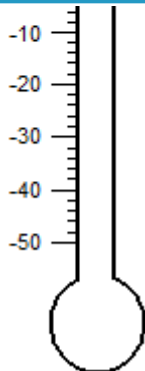
Sign up

www.mathworksheets4kids.com

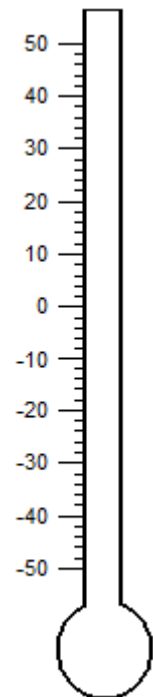
6) 48°C



7)



10) -47°C




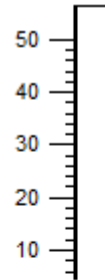
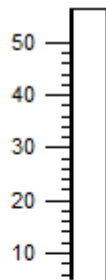

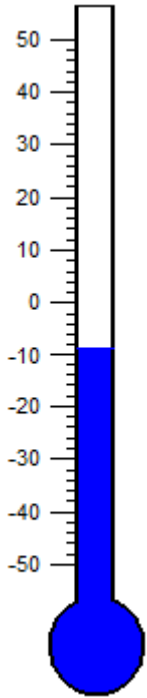
Answer key

Shading Thermometer

DS1

Shade the thermometer to show the temperature.

- 1) -9°C 2) 41°C 3) -48°C 4) -20°C 5) 24°C



PREVIEW

Access the largest collection of
worksheets for just **\$19.95** per year!

Members, please
log in to
download this
worksheet.





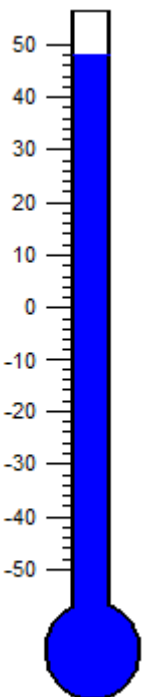
Log in

Not a member?
Please sign up to
gain complete
access.

Sign up

www.mathworksheets4kids.com

- 6) 48°C 7) _____



- 10) -47°C