

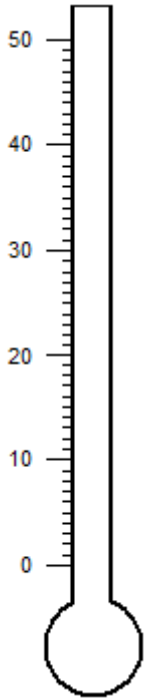
Name: _____

Shading Thermometer


Sheet 2

Shade each thermometer to indicate the specified temperature.

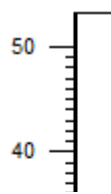
1) 32 °C



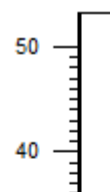
2) 40 °C



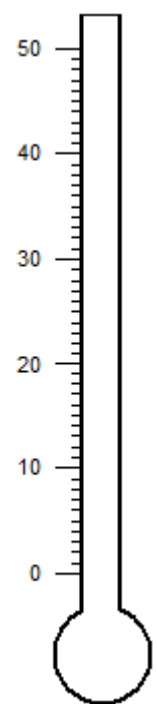
3) 6 °C



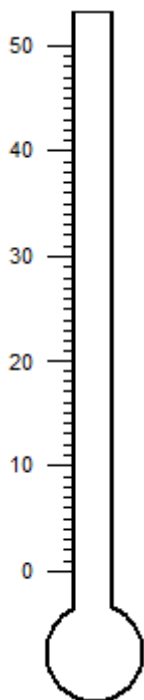
4) 19 °C



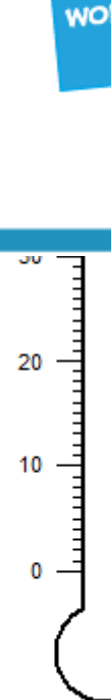
5) 47 °C



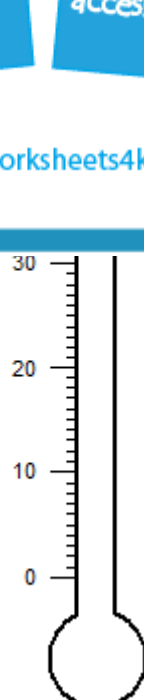
6) 24 °C



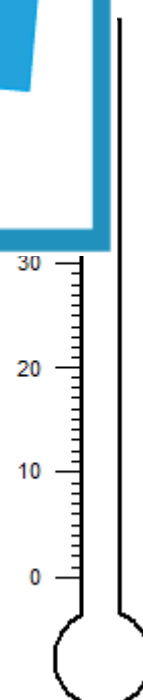
7)



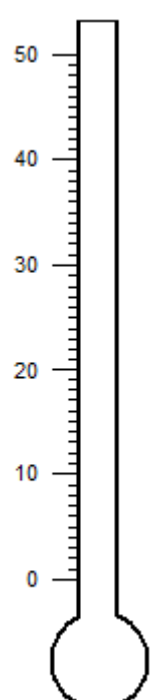
8)



9)



10) 31 °C



PREVIEW

Gain complete access to the largest collection of worksheets in all subjects!

Members, please log in to download this worksheet.

Not a member? Please sign up to gain complete access.

www.mathworksheets4kids.com