

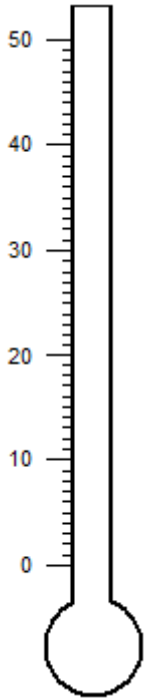
Name: _____

Shading Thermometer

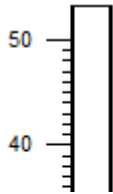
Sheet 3

Shade each thermometer to indicate the specified temperature.

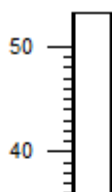
1) 10 °C



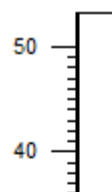
2) 26 °C



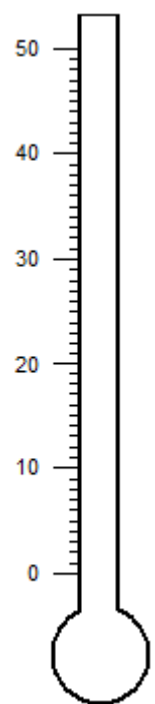
3) 5 °C



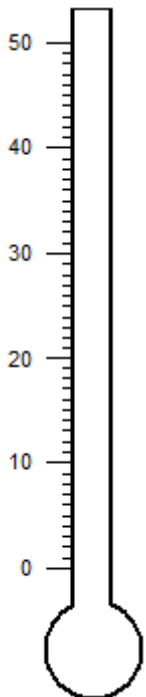
4) 49 °C



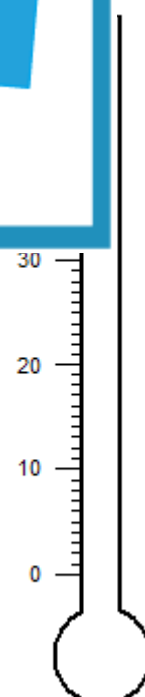
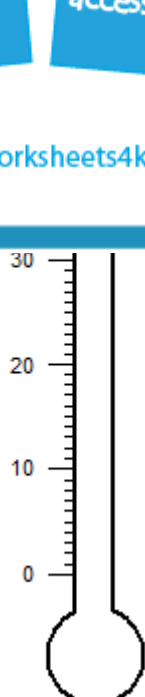
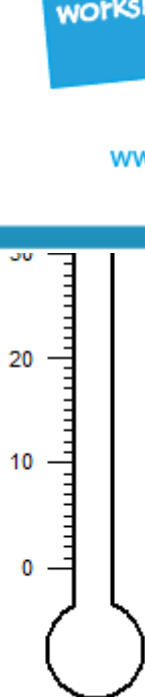
5) 33 °C



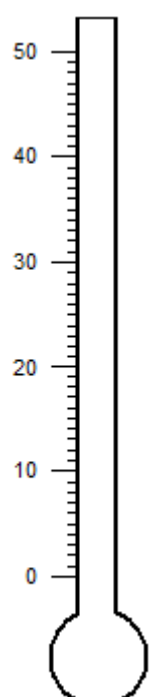
6) 30 °C



7)



10) 27 °C



PREVIEW

Gain complete access to the largest collection of worksheets in all subjects!

Members, please log in to download this worksheet.

Not a member? Please sign up to gain complete access.

www.mathworksheets4kids.com