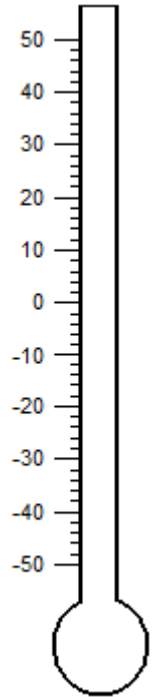
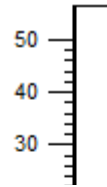





Name: _____

Shading Thermometer

Shade each thermometer to indicate the specified temperature.

- 1) -9°C 2) 41°C 3) -48°C 4) -20°C 5) 24°C



PREVIEW


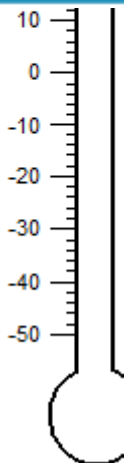
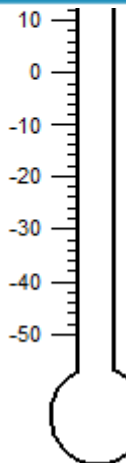

Gain complete access to the largest collection of worksheets in all subjects!

Members, please log in to download this worksheet.

Not a member? Please sign up to gain complete access.

www.mathworksheets4kids.com

- 6) 48°C 7)



- 10) -47°C

