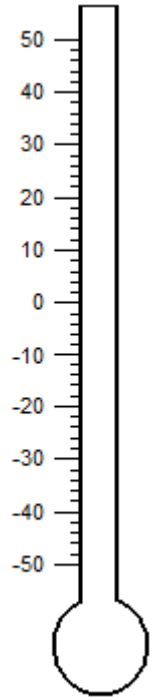
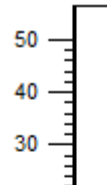





Name: _____

Shading Thermometer

Shade each thermometer to indicate the specified temperature.

- 1) 42 °C 2) -28 °C 3) 31 °C 4) -37 °C 5) 8 °C



PREVIEW

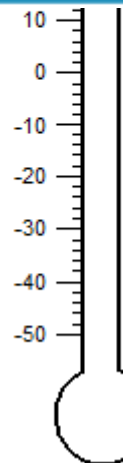

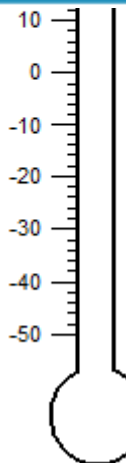

Gain complete access to the largest collection of worksheets in all subjects!

Members, please log in to download this worksheet.

Not a member? Please sign up to gain complete access.

www.mathworksheets4kids.com

- 6) 35 °C 7)



- 10) 18 °C

