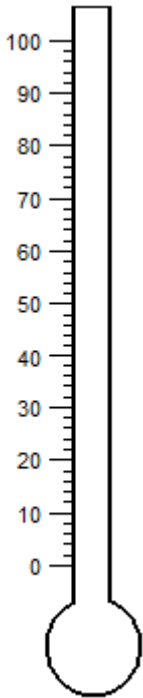


Name: \_\_\_\_\_


**Shading Thermometer**

Shade each thermometer to indicate the specified temperature.


1) 24 °C



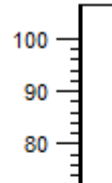
2) 51 °C



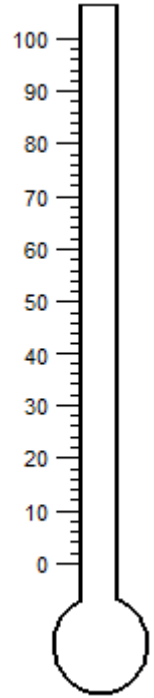
3) 42 °C



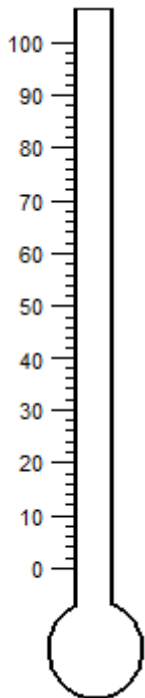
4) 84 °C




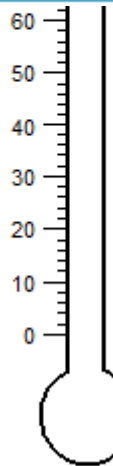
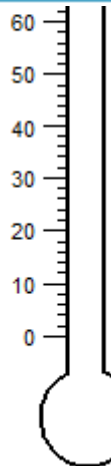
5) 91 °C



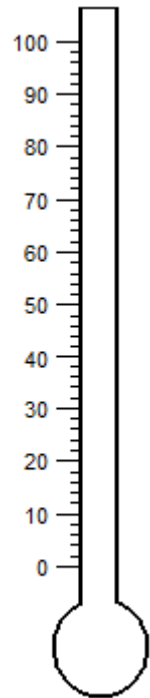
6) 12 °C



7)



10) 79 °C



**PREVIEW**

Gain complete access to the largest collection of worksheets in all subjects!

Members, please log in to download this worksheet.

Not a member? Please sign up to gain complete access.

[www.mathworksheets4kids.com](http://www.mathworksheets4kids.com)