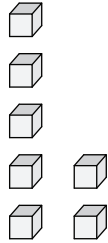


Name : _____

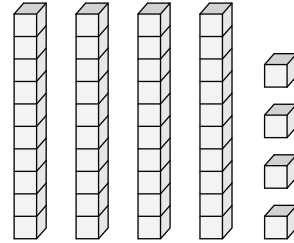
Ten More or Ten Less

Sheet 1

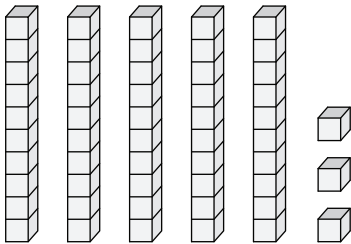
1) What is 10 more than the given set of blocks?



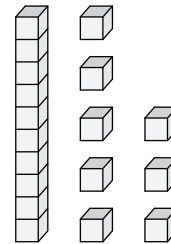
2) What is 10 less than the given set of blocks?



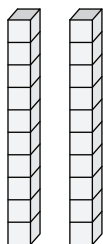
3) What is 10 less than the given set of blocks?



4) What is 10 more than the given set of blocks?



5) What is 10 more than the given set of blocks?



6) What is 10 less than the given set of blocks?

