


Ten More or Ten Less

Write the number that is ten more and the number that is ten less than each given number.

1)

10 less

10 more



2)

10 less


10 more



3)

10 less


10 more



Gain complete access to the largest
collection of worksheets in all subjects!

Members, please
log in to
download this
worksheet.

Not a member?
Please sign up to
gain complete
access.



5)

10 less

10 more



www.mathworksheets4kids.com