



Ten More or Ten Less

Write the number that is ten more and the number that is ten less than each given number.


1)

10 less**10 more**

2)

10 less**10 more**

3)


10 less**10 more**

PREVIEW
Gain complete access to the largest
collection of worksheets in all subjects!

Members, please
log in to
download this
worksheet.

Not a member?
Please sign up to
gain complete
access.

www.mathworksheets4kids.com



5)

10 less**10 more**