

Name : _____

Converting from 12-Hour to 24-Hour Clocks

A) Convert each time from 12-hour to 24-hour clock.

1) 4:36 p.m. = _____

2) 1:53 a.m. = _____

3) 11:07 a.m. = _____

4) 12:29 p.m. = _____

5) 8:45 p.m. = _____





6) 7:14 a.m. = _____

7) 5:20 a.m. = _____

8) 2:38 p.m. = _____

B) Read each analog

format.



PREVIEW

Gain complete access to the largest collection of worksheets in all subjects!

Members, please log in to download this worksheet.

Not a member? Please sign up to gain complete access.

www.mathworksheets4kids.com

C) Jenna's swimming lesson ends at 08:20 pm. Use the 24-hour clock and write at what time the class ends.

Converting from 12-Hour to 24-Hour Clocks

A) Convert each time from 12-hour to 24-hour clock.

1) 4:36 p.m. = 16:36

2) 1:53 a.m. = 01:53

3) 11:07 a.m. = 11:07

4) 12:29 p.m. = 12:29


5) 8:45 p.m. = 20:45

6) 7:14 a.m. = 07:14

7) 5:20 a.m. = 05:20

8) 2:38 p.m. = 14:38

B) Read each analog

**06:57**

PREVIEW



Gain complete access to the largest collection of worksheets in all subjects!

Members, please log in to download this worksheet.

Not a member? Please sign up to gain complete access.

www.mathworksheets4kids.com

format.

**03:44****21:18****22:00**

C) Jenna's swimming lesson ends at 08:20 pm. Use the 24-hour clock and write at what time the class ends.

20:20