

24 Hour Clock

Read the clock and write the time in both 12-hour and 24-hour notation.



12-hour : _____ A.M.

24-hour : _____



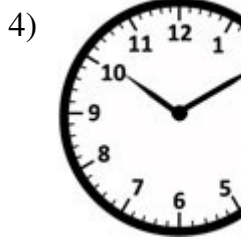
12-hour : _____ P.M.

24-hour : _____



12-hour : _____ P.M.

24-hour : _____




12-hour : _____

24-hour : _____



ur : _____ P.M.

ur : _____




12-hour : _____

24-hour : _____



ur : _____ A.M.

ur : _____



12-hour : _____ P.M.

24-hour : _____



12-hour : _____ A.M.

24-hour : _____



12-hour : _____ P.M.

24-hour : _____

PREVIEW

Gain complete access to the largest collection of worksheets in all subjects!

Members, please log in to download this worksheet.

Not a member? Please sign up to gain complete access.

www.mathworksheets4kids.com

Answer key

24 Hour Clock

Read the clock and write the time in both 12-hour and 24-hour notation.

1)



12-hour : **3:15** A.M.

24-hour : **3:15**

2)



12-hour : **1:48** P.M.

24-hour : **13:48**

3)



12-hour : **6:00** P.M.

24-hour : **18:00**

4)



12-hour : **10:10**

24-hour : **22:10**



12-hour : **9:40** P.M.

24-hour : **21:40**

7)



12-hour : **2:55**

24-hour : **2:55**



12-hour : **8:56** A.M.

24-hour : **8:56**

10)



12-hour : **5:22** P.M.

24-hour : **17:22**

11)



12-hour : **9:18** A.M.

24-hour : **9:18**

12)



12-hour : **11:11** P.M.

24-hour : **23:11**

PREVIEW

Gain complete access to the largest collection of worksheets in all subjects!

Members, please log in to download this worksheet.

Not a member? Please sign up to gain complete access.

www.mathworksheets4kids.com