

24 Hour Clock

Read the clock and write the time in both 12-hour and 24-hour notation.



12-hour : _____ A.M.

24-hour : _____




12-hour : _____ P.M.

24-hour : _____



12-hour : _____ P.M.

24-hour : _____




12-hour : _____

24-hour : _____



ur : _____ P.M.

ur : _____



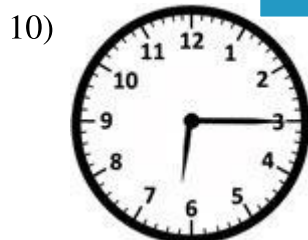
12-hour : _____

24-hour : _____



ur : _____ A.M.

ur : _____




12-hour : _____ P.M.

24-hour : _____



12-hour : _____ A.M.

24-hour : _____



12-hour : _____ P.M.

24-hour : _____

PREVIEW

Gain complete access to the largest collection of worksheets in all subjects!

Members, please log in to download this worksheet.

Not a member? Please sign up to gain complete access.

www.mathworksheets4kids.com