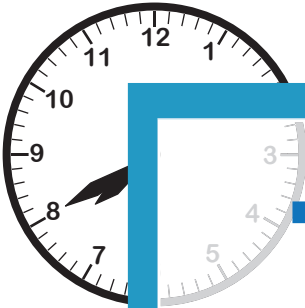


Telling Time

5 Minutes: S2

Match each analog clock to the digital clock that shows the same time.


1)



2)



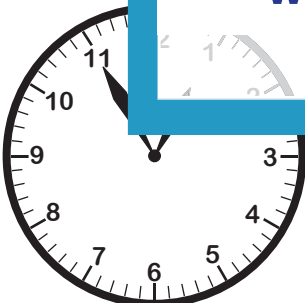
3)



4)



5)



PREVIEW

Gain complete access to the largest collection of worksheets in all subjects!

Members, please log in to download this worksheet.

Not a member? Please sign up to gain complete access.

www.mathworksheets4kids.com