

Name: _____

Digital and Analog Clock

Hourly: S1

Match the digital clock and analog clock that shows the same time.

1)



a)



2)



b)



3)



c)



4)



d)



5)



e)





Name: _____



Answer key



Digital and Analog Clock



Hourly: S1



Match the digital clock and analog clock that shows the same time.

1)  a) 

2)  b) 

3)  c) 

4)  d) 

5)  e) 

Red arrows indicate the following matches: 1) to d), 2) to e), 3) to c), 4) to a), and 5) to b).