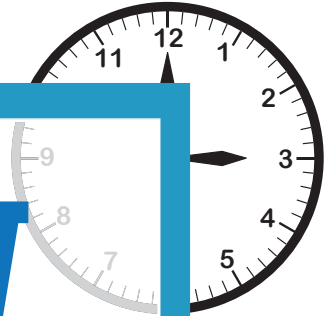


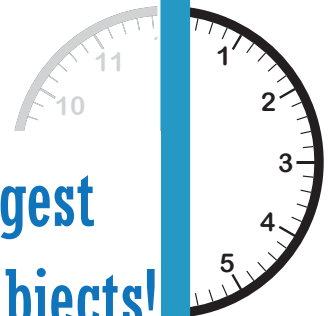
# Telling Time

Match each digital clock to the analog clock that shows the same time.

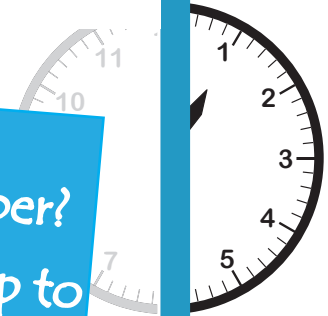
1)



2)



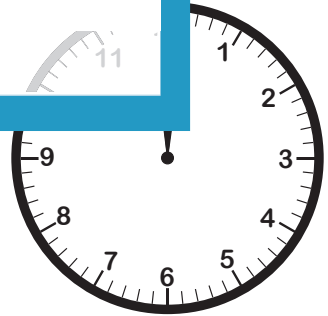
3)



4)



5)



# PREVIEW

Gain complete access to the largest collection of worksheets in all subjects!

Members, please log in to download this worksheet.

Not a member? Please sign up to gain complete access.

[www.mathworksheets4kids.com](http://www.mathworksheets4kids.com)