

**Digital and Analog Clock**

Minutes: S3

Match the digital clock and analog clock that shows the same time.

1)




a)



2)



3)



4)



5)



e)



**PREVIEW**

Gain complete access to the largest collection of worksheets in all subjects!

Members, please log in to download this worksheet.

Not a member? Please sign up to gain complete access.

[www.mathworksheets4kids.com](http://www.mathworksheets4kids.com)

**Answer key**

**Digital and Analog Clock**

Minutes: S3

Match the digital clock and analog clock that shows the same time.


1)




a)




2)



3)



4)



5)



e)



**PREVIEW**

Gain complete access to the largest collection of worksheets in all subjects!

Members, please log in to download this worksheet.

Not a member? Please sign up to gain complete access.

[www.mathworksheets4kids.com](http://www.mathworksheets4kids.com)