

Name: \_\_\_\_\_

**Digital and Analog Clock**

Quarterly: S1

Match the digital clock and analog clock that shows the same time.

1)



a)



2)



b)



3)



c)



4)



d)



5)



e)





Name: \_\_\_\_\_



**Answer key**



**Digital and Analog Clock**



Quarterly: S1



Match the digital clock and analog clock that shows the same time.

1)  a) 

2)  b) 

3)  c) 

4)  d) 

5)  e) 

The image shows five digital clocks on the left and five analog clocks on the right. Red arrows indicate the correct matches: 1) Digital 12:15 to Analog a) 12:15; 2) Digital 6:30 to Analog d) 6:30; 3) Digital 8:45 to Analog c) 10:30; 4) Digital 1:00 to Analog b) 12:30; 5) Digital 10:15 to Analog e) 9:15.