

Name: \_\_\_\_\_

**Drawing Hands - 5 Minutes**

Sheet 1


Draw hands on each clock for the time given below:

1)



Time: **8:05**

2)



**1:10**

3)



4)



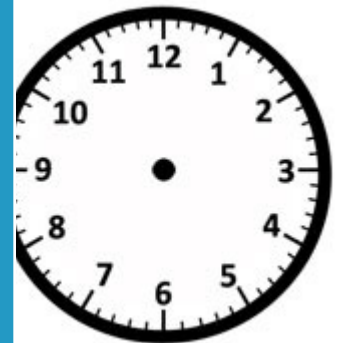
Time: **7:25**

**PREVIEW**  
Gain complete access to the largest collection of worksheets in all subjects!

Members, please log in to download this worksheet.


Not a member? Please sign up to gain complete access.

[www.mathworksheets4kids.com](http://www.mathworksheets4kids.com)



**12:15**

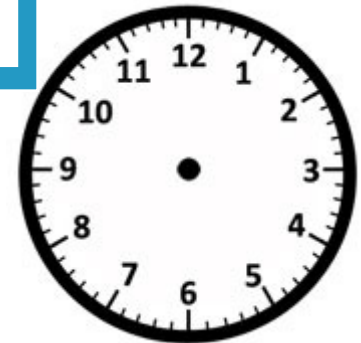
7)



Time: **11:30**



Time: **3:40**



Time: **9:55**

Name: \_\_\_\_\_

**Answer key**

**Drawing Hands - 5 Minutes**

Sheet 1

Draw hands on each clock for the time given below:

1)



Time: 8:05

2)



Time: 1:10

3)



4)




Time: 7:25

Gain complete access to the largest collection of worksheets in all subjects!

Members, please log in to download this worksheet.

Not a member? Please sign up to gain complete access.

[www.mathworksheets4kids.com](http://www.mathworksheets4kids.com)

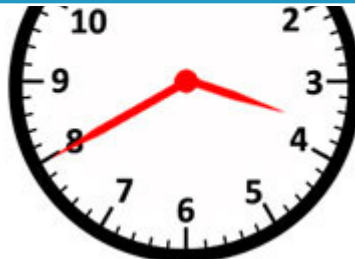


Time: 12:15

7)



Time: 11:30



Time: 3:40



Time: 9:55