

Drawing Hands - Half Hours

Draw hands on each clock for the time given below:

1)




Time: 4:30

2)



1:00

3)



4)




Time: 9:00

Gain complete access to the largest collection of worksheets in all subjects!

Members, please log in to download this worksheet.

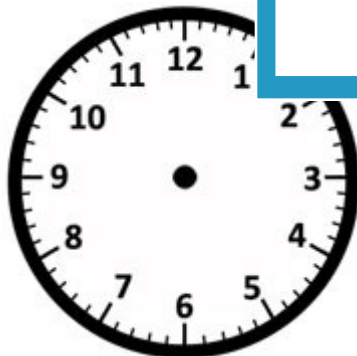
Not a member? Please sign up to gain complete access.

www.mathworksheets4kids.com



10:30


7)



Time: 2:30



Time: 12:00



Time: 6:30

Name: _____

Answer key

Drawing Hands - Half Hours

Draw hands on each clock for the time given below:

1)



Time: 4:30

2)



1:00

3)



4)



Time: 9:00

Gain complete access to the largest collection of worksheets in all subjects!

Members, please log in to download this worksheet.

Not a member? Please sign up to gain complete access.

www.mathworksheets4kids.com




10:30

7)



Time: 2:30



Time: 12:00



Time: 6:30