

Drawing Hands - Hours

Draw hands on each clock for the time given below:

1)



Time: 12:00

2)



9:00

3)



4)



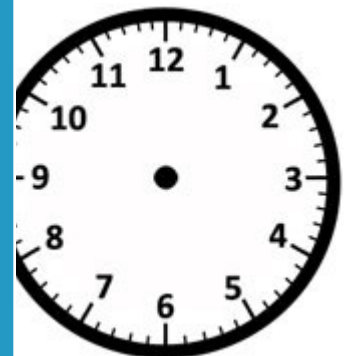
Time: 3:00

Gain complete access to the largest collection of worksheets in all subjects!

Members, please log in to download this worksheet.

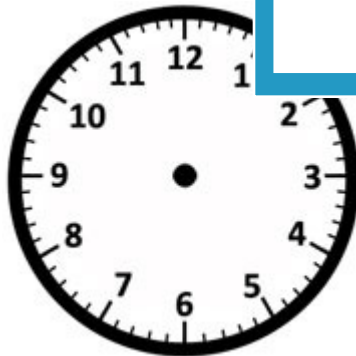
Not a member? Please sign up to gain complete access.

www.mathworksheets4kids.com



10:00

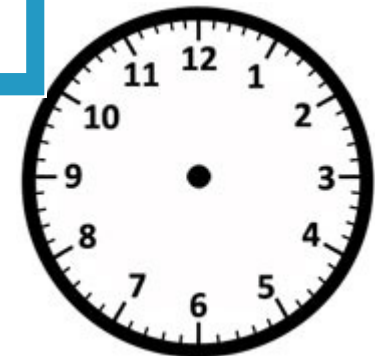
7)



Time: 7:00



Time: 2:00



Time: 1:00

Name: _____

Answer key

Drawing Hands - Hours

Sheet 2

Draw hands on each clock for the time given below:

1)



Time: 12:00

2)



9:00

3)



4)




Time: 3:00

Gain complete access to the largest collection of worksheets in all subjects!

Members, please log in to download this worksheet.

Not a member? Please sign up to gain complete access.

www.mathworksheets4kids.com



10:00

7)



Time: 7:00



Time: 2:00



Time: 1:00