

Drawing Hands - Minutes

Draw hands on each clock for the time given below:

1)



Time: 5:59

2)



11:11

3)



4)



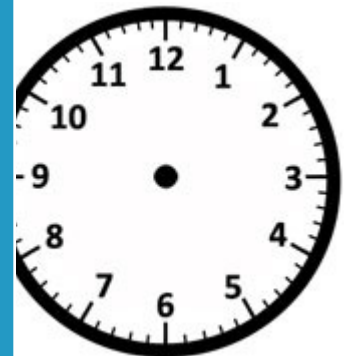
Time: 10:15

Gain complete access to the largest collection of worksheets in all subjects!

Members, please log in to download this worksheet.

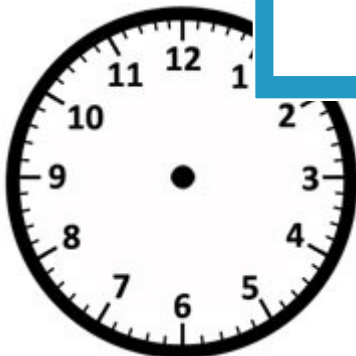
Not a member? Please sign up to gain complete access.

www.mathworksheets4kids.com



6:36


7)



Time: 2:38



Time: 4:42



Time: 8:30

Name: _____

Answer key

Drawing Hands - Minutes

Sheet 2

Draw hands on each clock for the time given below:

1)



2)



3)



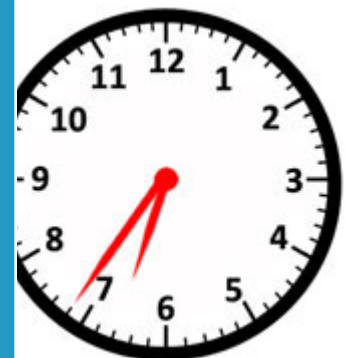
Time: 5:59

11:11

4)



Gain complete access to the largest collection of worksheets in all subjects!



Time: 10:15


6:36

Members, please log in to download this worksheet.

Not a member? Please sign up to gain complete access.

www.mathworksheets4kids.com

7)



Time: 2:38

Time: 4:42

Time: 8:30