

**Drawing Hands - Minutes**

Draw hands on each clock for the time given below:

1)




Time: 7:32

2)



3:38

3)



4)



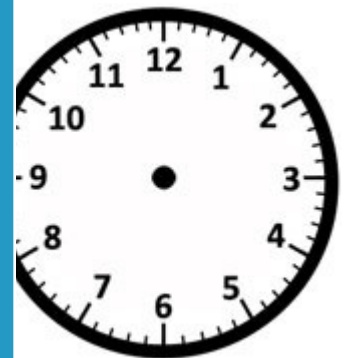
Time: 12:24

Gain complete access to the largest collection of worksheets in all subjects!

Members, please log in to download this worksheet.


Not a member? Please sign up to gain complete access.

[www.mathworksheets4kids.com](http://www.mathworksheets4kids.com)

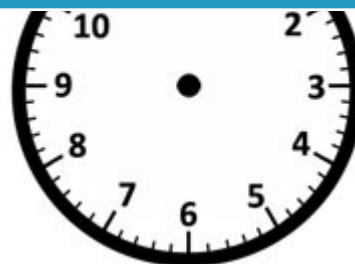


8:07

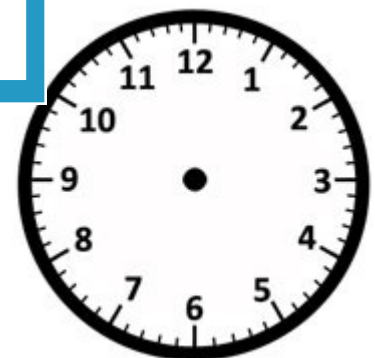
7)



Time: 10:59



Time: 1:48



Time: 5:15

Name: \_\_\_\_\_

### Answer key

#### Drawing Hands - Minutes

Sheet 3

Draw hands on each clock for the time given below:

1)



Time:

7:32

2)



3:38

3)



4)



Time:


12:24

Gain complete access to the largest collection of worksheets in all subjects!

Members, please log in to download this worksheet.

Not a member? Please sign up to gain complete access.

[www.mathworksheets4kids.com](http://www.mathworksheets4kids.com)



8:07

7)



Time:

10:59



Time:

1:48



Time:

5:15