

Name: _____

Drawing Hands - Quarters

Sheet 3

Draw hands on each clock for the time given below:

1)



Time: 7:00

2)



4:15

3)



4)




Time: 2:45

Gain complete access to the largest collection of worksheets in all subjects!

Members, please log in to download this worksheet.

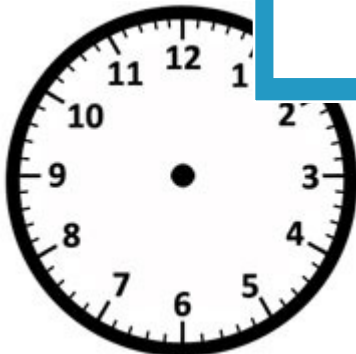
Not a member? Please sign up to gain complete access.

www.mathworksheets4kids.com



12:30

7)



Time: 5:30



Time: 8:45



Time: 10:15

Name: _____

Answer key

Drawing Hands - Quarters

Sheet 3

Draw hands on each clock for the time given below:

1)



Time: 7:00

2)



Time: 4:15

3)



4)



Time: 2:45

Gain complete access to the largest collection of worksheets in all subjects!

Members, please log in to download this worksheet.

Not a member? Please sign up to gain complete access.

www.mathworksheets4kids.com

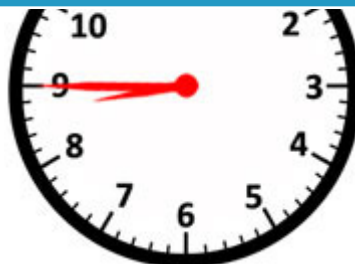


Time: 12:30

7)



Time: 5:30



Time: 8:45



Time: 10:15