

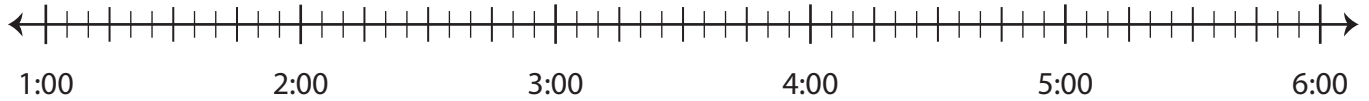
Name : \_\_\_\_\_

## Elapsed Time

5 minutes: L1S1

Draw hops on the number line and find the elapsed time.

- 1) Start time: 3:00 a.m.      End time: 4:25 a.m.



Elapsed time: \_\_\_\_\_

- 2) Start time: 5:15 p.m.



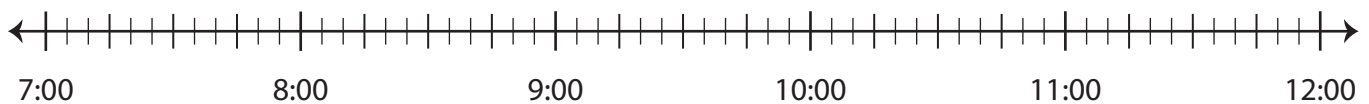
Elapsed time: \_\_\_\_\_

- 3) Start time: 12:00 a.m.



Elapsed time: \_\_\_\_\_

- 4) Start time: 8:40 p.m.      End time: 11:10 p.m.



Elapsed time: \_\_\_\_\_

**PREVIEW**

Gain complete access to the largest collection of worksheets in all subjects!

Members, please log in to download this worksheet.

Not a member? Please sign up to gain complete access.

[www.mathworksheets4kids.com](http://www.mathworksheets4kids.com)

Name : \_\_\_\_\_

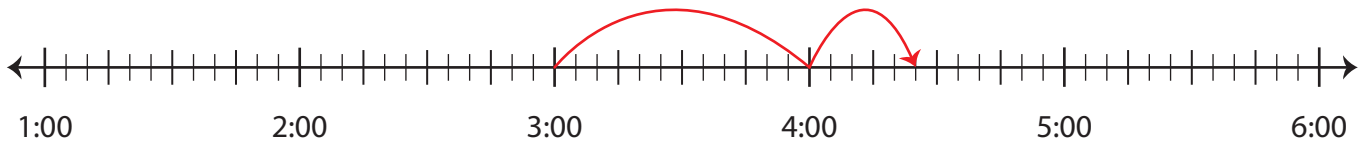
## Answer Key

### Elapsed Time

5 minutes: L1S1

Draw hops on the number line and find the elapsed time.

- 1) Start time: 3:00 a.m. End time: 4:25 a.m.



Elapsed time: 1 hour and 25 minutes

- 2) Start time: 5:15 p.m.



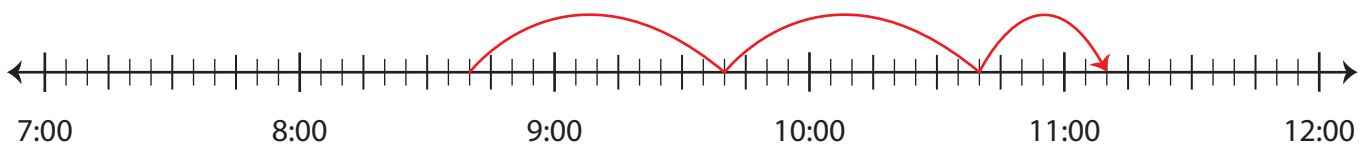
Elapsed time: \_\_\_\_\_

- 3) Start time: 12:00 a.m.



Elapsed time: \_\_\_\_\_

- 4) Start time: 8:40 p.m. End time: 11:10 p.m.



Elapsed time: 2 hours and 30 minutes

**PREVIEW**

Gain complete access to the largest collection of worksheets in all subjects!

Members, please log in to download this worksheet.

Not a member? Please sign up to gain complete access.

[www.mathworksheets4kids.com](http://www.mathworksheets4kids.com)