

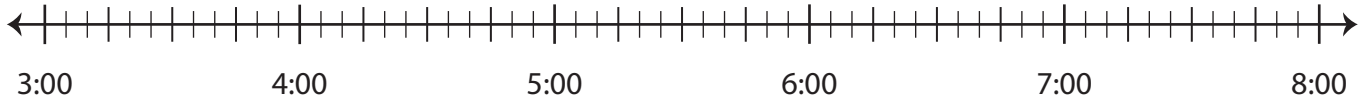
Name : \_\_\_\_\_

## Elapsed Time

5 minutes: L1S2

Draw hops on the number line and find the elapsed time.

- 1) Start time: 4:10 p.m.      End time: 7:10 p.m.



Elapsed time: \_\_\_\_\_

- 2) Start time: 10:00 a.m.



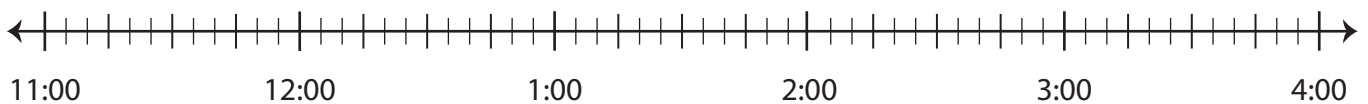
Elapsed time: \_\_\_\_\_

- 3) Start time: 6:05 p.m.



Elapsed time: \_\_\_\_\_

- 4) Start time: 1:00 a.m.      End time: 2:50 a.m.



Elapsed time: \_\_\_\_\_

**PREVIEW**

Gain complete access to the largest collection of worksheets in all subjects!

Members, please log in to download this worksheet.

Not a member? Please sign up to gain complete access.

[www.mathworksheets4kids.com](http://www.mathworksheets4kids.com)

Name : \_\_\_\_\_

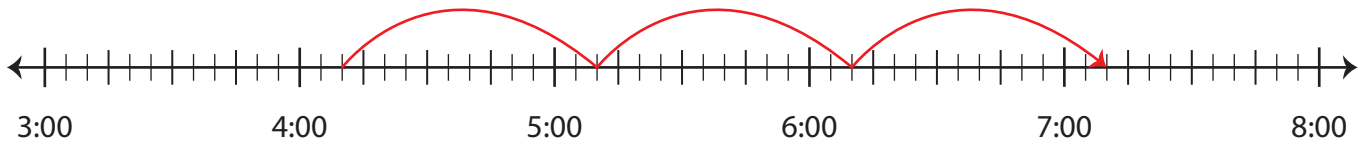
## Answer Key

### Elapsed Time

5 minutes: L1S2

Draw hops on the number line and find the elapsed time.

- 1) Start time: 4:10 p.m. End time: 7:10 p.m.



Elapsed time: 3 hours

- 2) Start time: 10:00 a.m.



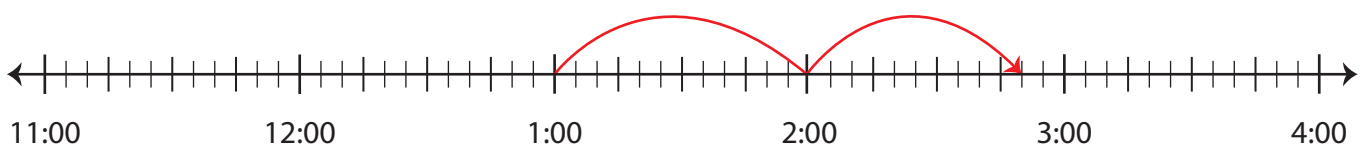
Elapsed time: \_\_\_\_\_

- 3) Start time: 6:05 p.m.



Elapsed time: \_\_\_\_\_

- 4) Start time: 1:00 a.m. End time: 2:50 a.m.



Elapsed time: 1 hour and 50 minutes

**PREVIEW**

Gain complete access to the largest collection of worksheets in all subjects!

Members, please log in to download this worksheet.

Not a member? Please sign up to gain complete access.

[www.mathworksheets4kids.com](http://www.mathworksheets4kids.com)