

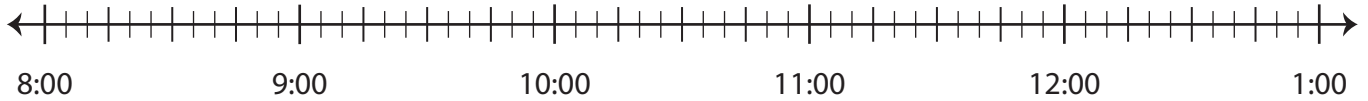
Name : _____

Elapsed Time

5 minutes: L2S2

Draw hops on the number line and find the elapsed time.

- 1) Start time: 8:00 a.m. End time: 12:20 p.m.



Elapsed time: _____

- 2) Start time: 12:15 p.m.



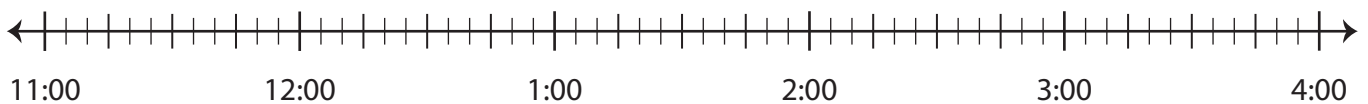
Elapsed time: _____

- 3) Start time: 10:05 a.m.



Elapsed time: _____

- 4) Start time: 11:25 p.m. End time: 12:15 a.m.



Elapsed time: _____

PREVIEW

Gain complete access to the largest collection of worksheets in all subjects!

Members, please log in to download this worksheet.

Not a member? Please sign up to gain complete access.

www.mathworksheets4kids.com

Name : _____

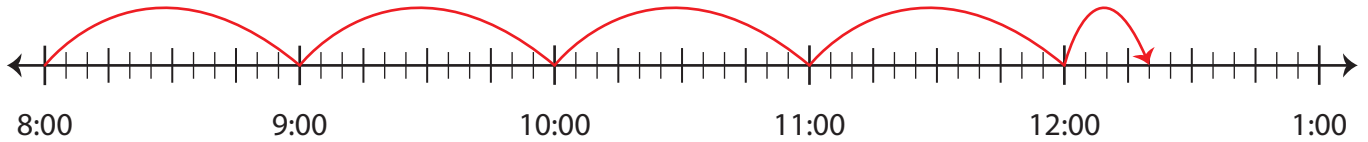
Answer Key

Elapsed Time

5 minutes: L2S2

Draw hops on the number line and find the elapsed time.

- 1) Start time: 8:00 a.m. End time: 12:20 p.m.



Elapsed time: 4 hours and 20 minutes

- 2) Start time: 12:15 p.m.



Elapsed time: _____

- 3) Start time: 10:05 a.m.



Elapsed time: _____

- 4) Start time: 11:25 p.m. End time: 12:15 a.m.



Elapsed time: 50 minutes

PREVIEW

Gain complete access to the largest collection of worksheets in all subjects!

Members, please log in to download this worksheet.

Not a member? Please sign up to gain complete access.

www.mathworksheets4kids.com