

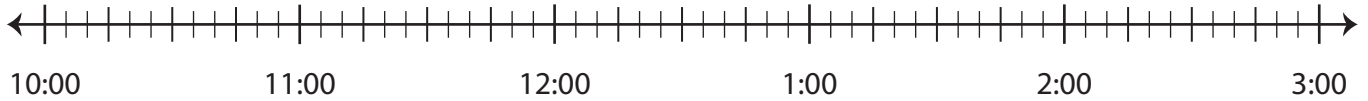
Name : _____

Elapsed Time

5 minutes: L2S3

Draw hops on the number line and find the elapsed time.

- 1) Start time: 10:00 p.m. End time: 12:20 a.m.



Elapsed time: _____

- 2) Start time: 11:30 a.m.



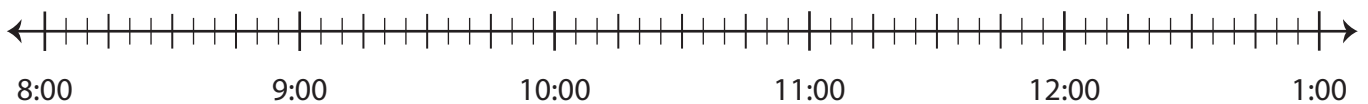
Elapsed time: _____

- 3) Start time: 12:55 p.m.



Elapsed time: _____

- 4) Start time: 9:00 a.m. End time: 12:40 p.m.



Elapsed time: _____

PREVIEW

Gain complete access to the largest collection of worksheets in all subjects!

Members, please log in to download this worksheet.

Not a member? Please sign up to gain complete access.

www.mathworksheets4kids.com

Name : _____

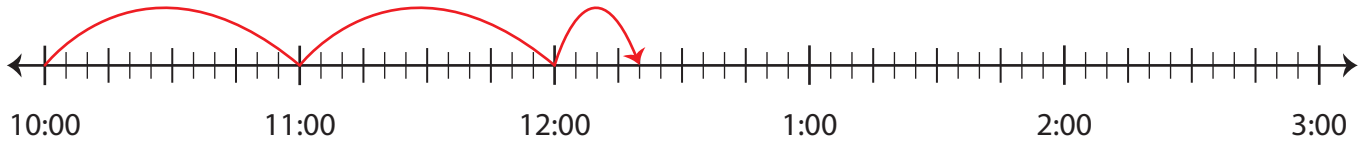
Answer Key

Elapsed Time

5 minutes: L2S3

Draw hops on the number line and find the elapsed time.

- 1) Start time: 10:00 p.m. End time: 12:20 a.m.



Elapsed time: 2 hours and 20 minutes

- 2) Start time: 11:30 a.m.



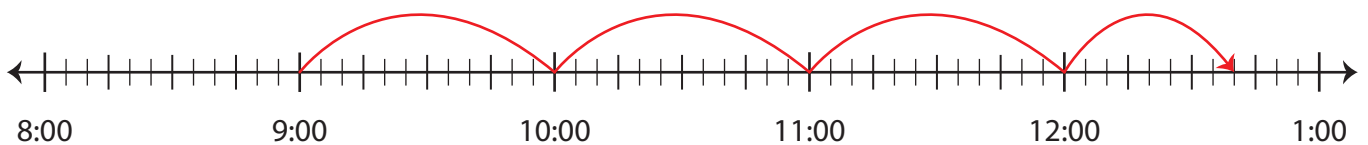
Elapsed time: _____

- 3) Start time: 12:55 p.m.



Elapsed time: _____

- 4) Start time: 9:00 a.m. End time: 12:40 p.m.



Elapsed time: 3 hours and 40 minutes

PREVIEW

Gain complete access to the largest collection of worksheets in all subjects!

Members, please log in to download this worksheet.

Not a member? Please sign up to gain complete access.

www.mathworksheets4kids.com