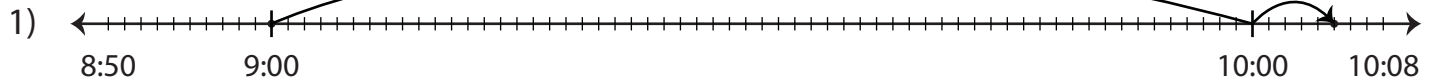


Name : _____

Elapsed Time

Minutes: 51

Read the number line and determine the elapsed time.



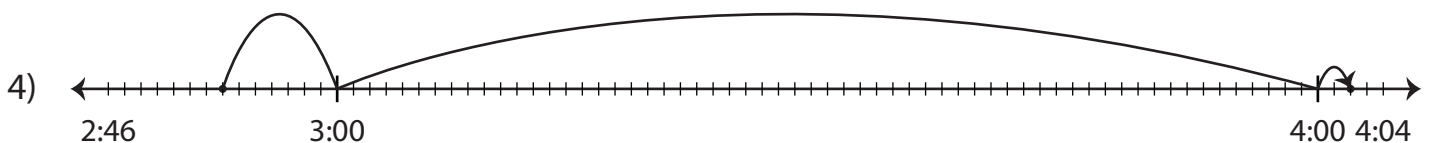
Start time	End time	Elapsed time
9:00 p.m.	10:05 p.m.	



Start time	End time	Elapsed time
5:50 a.m.		



Start time	End time	Elapsed time
11:48 a.m.		



Start time	End time	Elapsed time
2:53 p.m.	4:02 p.m.	

PREVIEW

Gain complete access to the largest collection of worksheets in all subjects!

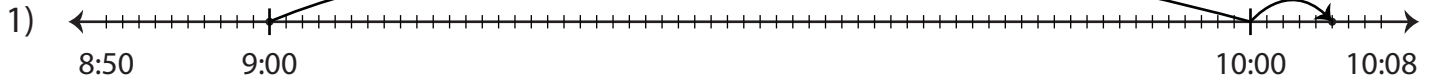
Members, please log in to download this worksheet.

Not a member? Please sign up to gain complete access.

www.mathworksheets4kids.com

Elapsed Time

Read the number line and determine the elapsed time.



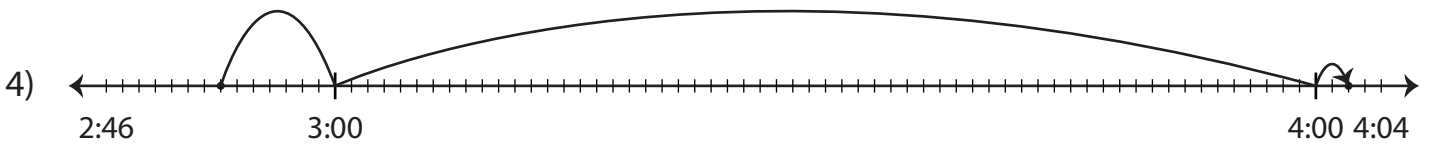
Start time	End time	Elapsed time
9:00 p.m.	10:05 p.m.	1 hour and 5 minutes



Start time	End time	Elapsed time
5:50 a.m.	7:00 a.m.	1 hour and 10 minutes



Start time	End time	Elapsed time
11:48 a.m.	12:28 p.m.	40 minutes



Start time	End time	Elapsed time
2:53 p.m.	4:02 p.m.	1 hour and 9 minutes

PREVIEW

Gain complete access to the largest collection of worksheets in all subjects!

Members, please log in to download this worksheet.

Not a member? Please sign up to gain complete access.

www.mathworksheets4kids.com