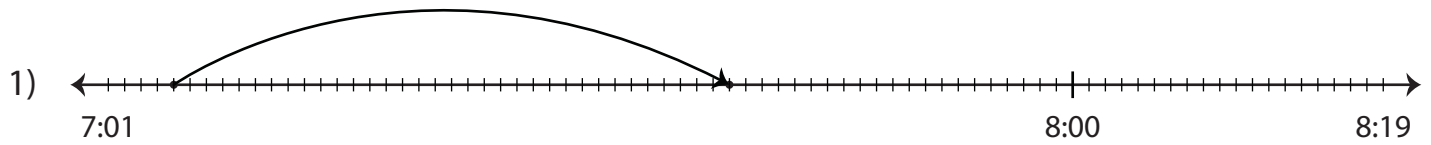


Elapsed Time

Minutes: 52

Read the number line and determine the elapsed time.



Start time	End time	Elapsed time
7:05 a.m.	7:39 a.m.	



Start time	End time	Elapsed time
1:58 p.m.		



Start time	End time	Elapsed time
5:00 a.m.		

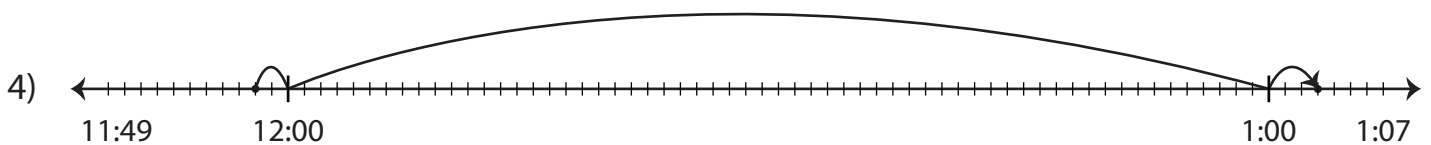
PREVIEW

Gain complete access to the largest collection of worksheets in all subjects!

Members, please log in to download this worksheet.

Not a member? Please sign up to gain complete access.

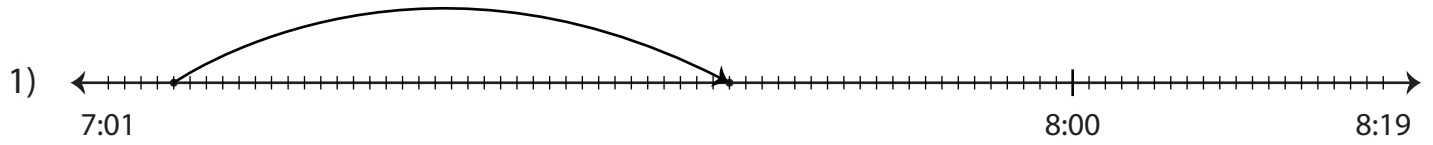
www.mathworksheets4kids.com



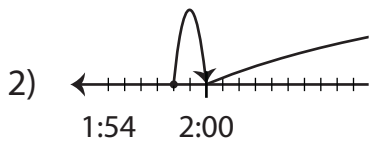
Start time	End time	Elapsed time
11:58 p.m.	1:03 a.m.	

Elapsed Time

Read the number line and determine the elapsed time.



Start time	End time	Elapsed time
7:05 a.m.	7:39 a.m.	34 minutes



Start time
1:58 p.m.

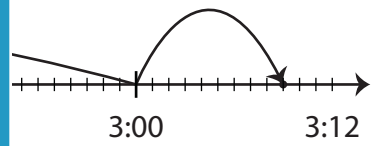
PREVIEW

Gain complete access to the largest collection of worksheets in all subjects!

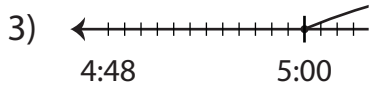
Members, please log in to download this worksheet.

Not a member? Please sign up to gain complete access.

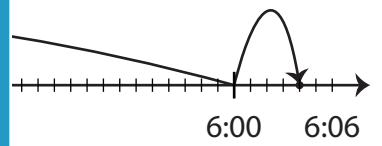
www.mathworksheets4kids.com



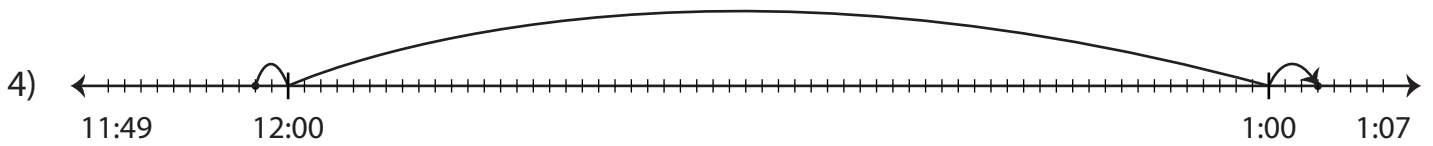
End time	Elapsed time
3:12	12 minutes



Start time
5:00 a.m.



End time	Elapsed time
6:06	6 minutes



Start time	End time	Elapsed time
11:58 p.m.	1:03 a.m.	1 hour and 5 minutes