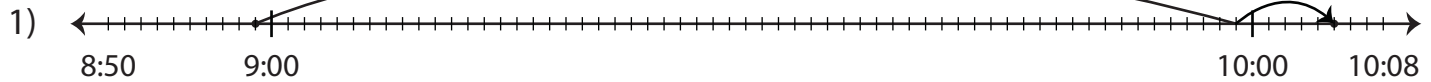


Name : _____

Elapsed Time

Minutes: 53

Read the number line and determine the elapsed time.



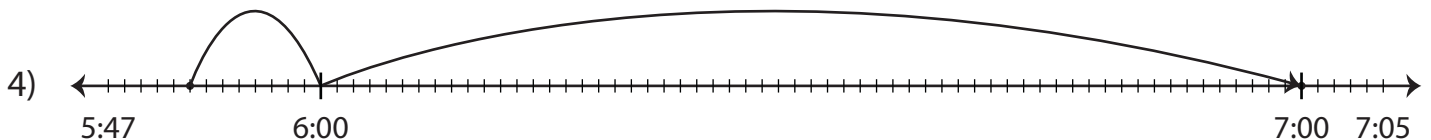
Start time	End time	Elapsed time
8:59 p.m.	10:05 p.m.	



Start time	End time	Elapsed time
11:18 a.m.		



Start time	End time	Elapsed time
2:50 a.m.		



Start time	End time	Elapsed time
5:52 p.m.	7:00 p.m.	

PREVIEW

Gain complete access to the largest collection of worksheets in all subjects!

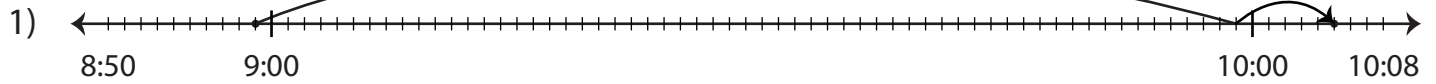
Members, please log in to download this worksheet.

Not a member? Please sign up to gain complete access.

www.mathworksheets4kids.com

Elapsed Time

Read the number line and determine the elapsed time.



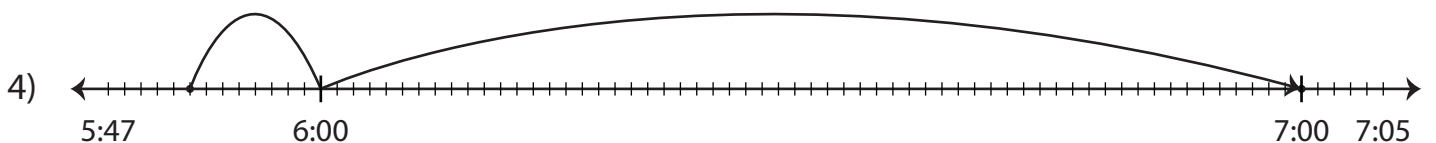
Start time	End time	Elapsed time
8:59 p.m.	10:05 p.m.	1 hour and 6 minutes



Start time	End time	Elapsed time
11:18 a.m.	12:22 p.m.	1 hour and 4 minutes



Start time	End time	Elapsed time
2:50 a.m.	4:00 p.m.	1 hour and 10 minutes



Start time	End time	Elapsed time
5:52 p.m.	7:00 p.m.	1 hour and 8 minutes

PREVIEW

Gain complete access to the largest collection of worksheets in all subjects!

Members, please log in to download this worksheet.

Not a member? Please sign up to gain complete access.

www.mathworksheets4kids.com