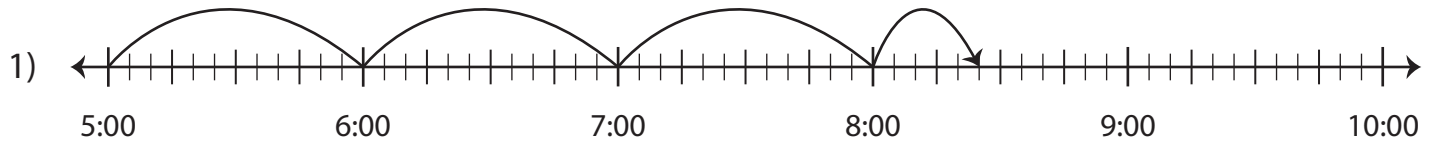


# Elapsed Time

Find the missing start or end time.



Start time	End time	Elapsed time
	8:25 a.m.	3 hours and 25 minutes



Start time	End time	Elapsed time



Start time	End time	Elapsed time
9:45 a.m.		

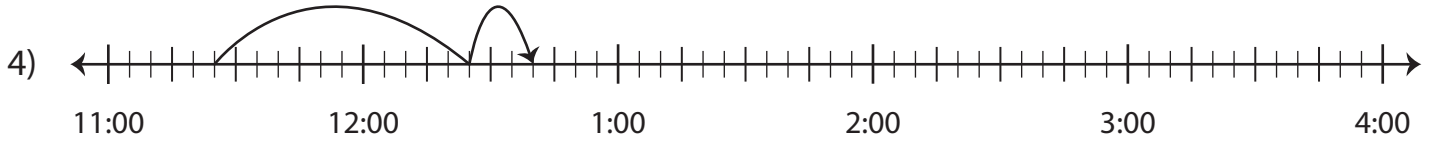
## PREVIEW

Gain complete access to the largest collection of worksheets in all subjects!

Members, please log in to download this worksheet.

Not a member? Please sign up to gain complete access.

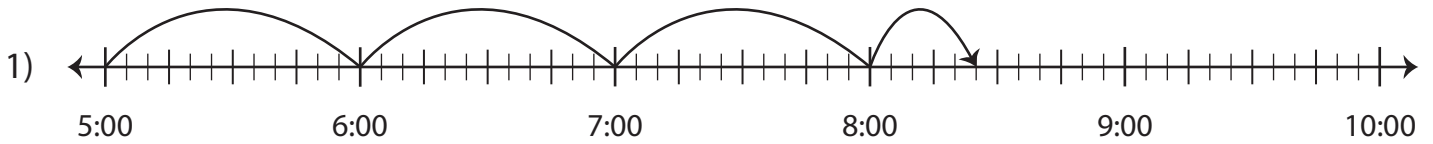
[www.mathworksheets4kids.com](http://www.mathworksheets4kids.com)



Start time	End time	Elapsed time
11:25 p.m.		1 hour and 15 minutes

**Elapsed Time**

Find the missing start or end time.



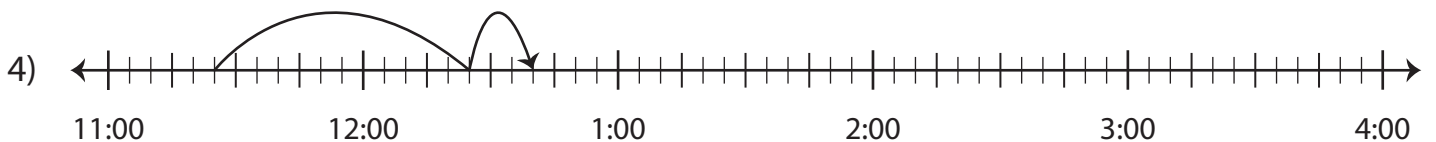
Start time	End time	Elapsed time
<b>5:00 a.m.</b>	8:25 a.m.	3 hours and 25 minutes



Start time	End time	Elapsed time
<b>3:30 p.m.</b>	4:00 p.m.	30 minutes



Start time	End time	Elapsed time
9:45 a.m.	10:00 a.m.	15 minutes



Start time	End time	Elapsed time
11:25 p.m.	<b>12:40 a.m.</b>	1 hour and 15 minutes

**PREVIEW**

Gain complete access to the largest collection of worksheets in all subjects!

Members, please log in to download this worksheet.

Not a member? Please sign up to gain complete access.

[www.mathworksheets4kids.com](http://www.mathworksheets4kids.com)