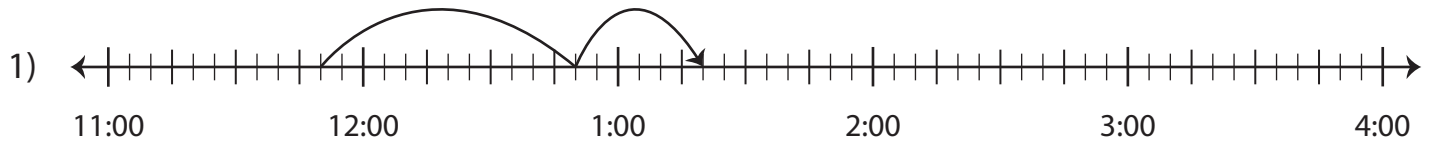


# Elapsed Time

Find the missing start or end time.



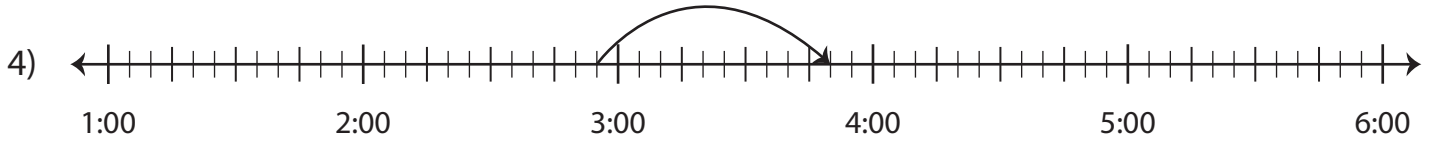
Start time	End time	Elapsed time
11:50 a.m.		1 hour and 30 minutes



Start time	End time	Elapsed time
8:00 p.m.		45 minutes



Start time	End time	Elapsed time
		45 minutes



Start time	End time	Elapsed time
	3:50 a.m.	55 minutes

## PREVIEW

Gain complete access to the largest collection of worksheets in all subjects!

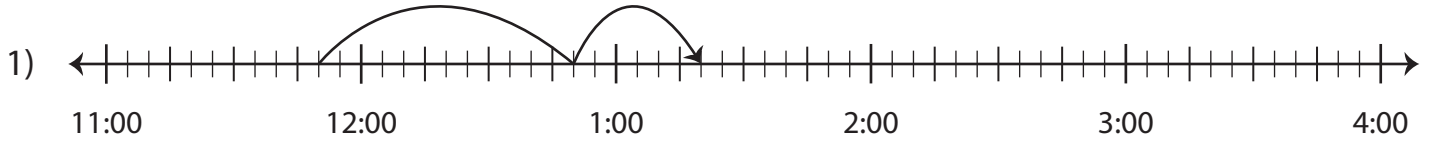
Members, please log in to download this worksheet.

Not a member? Please sign up to gain complete access.

www.mathworksheets4kids.com

**Elapsed Time**

Find the missing start or end time.



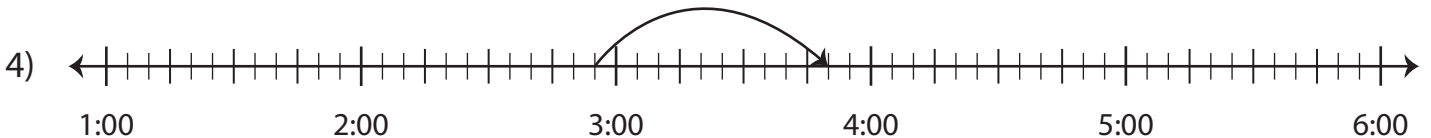
Start time	End time	Elapsed time
11:50 a.m.	<b>1:20 p.m.</b>	1 hour and 30 minutes



Start time	End time	Elapsed time
8:00 p.m.		30 minutes



Start time	End time	Elapsed time
<b>4:20 p.m.</b>		45 minutes



Start time	End time	Elapsed time
<b>2:55 a.m.</b>	3:50 a.m.	55 minutes

**PREVIEW**

Gain complete access to the largest collection of worksheets in all subjects!

Members, please log in to download this worksheet.

Not a member? Please sign up to gain complete access.

[www.mathworksheets4kids.com](http://www.mathworksheets4kids.com)