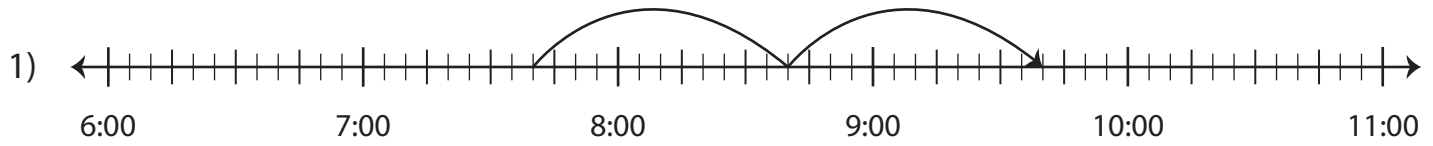


# Elapsed Time

Find the missing start or end time.



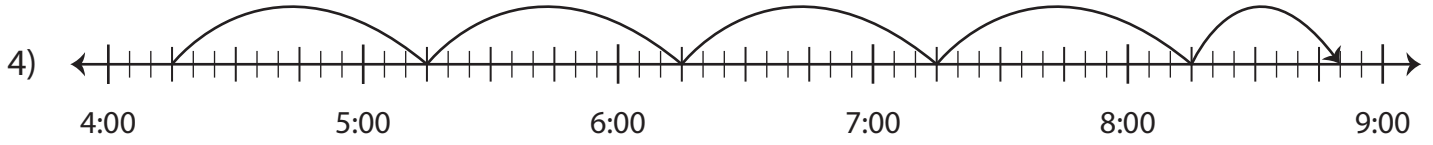
Start time	End time	Elapsed time
7:40 p.m.		2 hours



Start time	End time	Elapsed time
		20 minutes



Start time	End time	Elapsed time
		45 minutes



Start time	End time	Elapsed time
4:15 a.m.		4 hours and 35 minutes

## PREVIEW

Gain complete access to the largest collection of worksheets in all subjects!

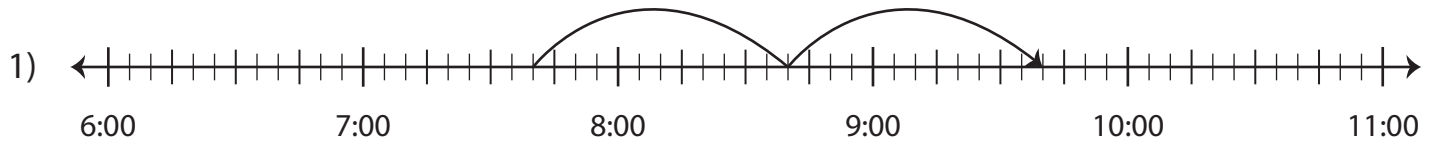
Members, please log in to download this worksheet.

Not a member? Please sign up to gain complete access.

[www.mathworksheets4kids.com](http://www.mathworksheets4kids.com)

**Elapsed Time**

Find the missing start or end time.



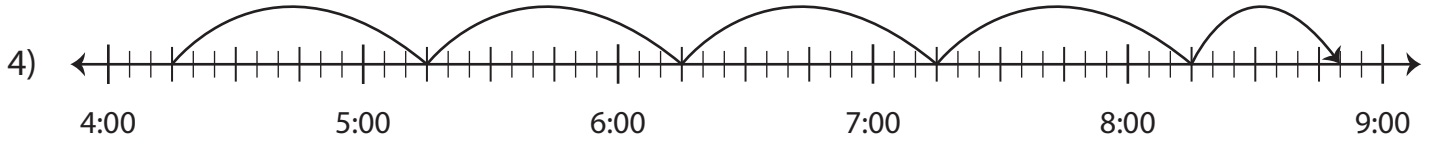
Start time	End time	Elapsed time
7:40 p.m.	<b>9:40 p.m.</b>	2 hours



Start time	End time	Elapsed time
<b>10:05 a.m.</b>	10:55 a.m.	50 minutes



Start time	End time	Elapsed time
<b>11:10 p.m.</b>	12:05 a.m.	55 minutes



Start time	End time	Elapsed time
4:15 a.m.	<b>8:50 a.m.</b>	4 hours and 35 minutes

**PREVIEW**

Gain complete access to the largest collection of worksheets in all subjects!

Members, please log in to download this worksheet.

Not a member? Please sign up to gain complete access.

[www.mathworksheets4kids.com](http://www.mathworksheets4kids.com)