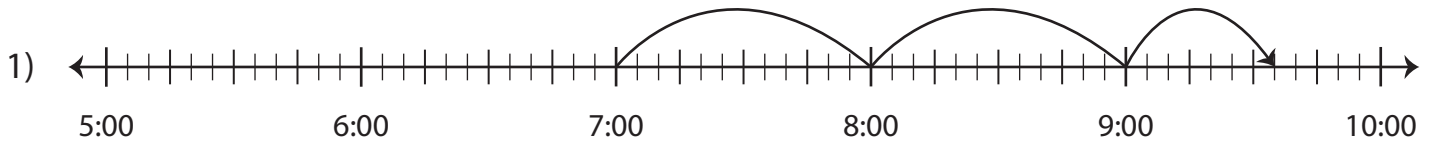


Name : \_\_\_\_\_

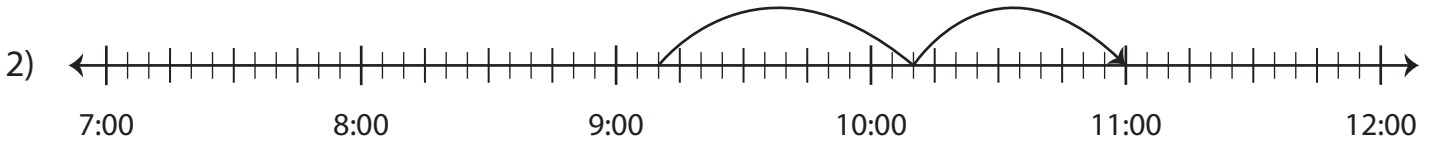
# Elapsed Time

5 minutes: L1S1

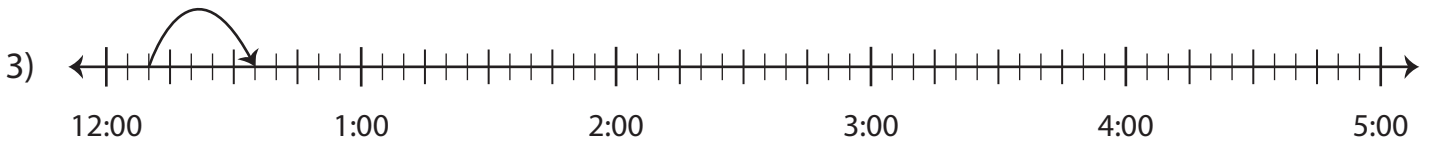
Write the elapsed time using start and end time.



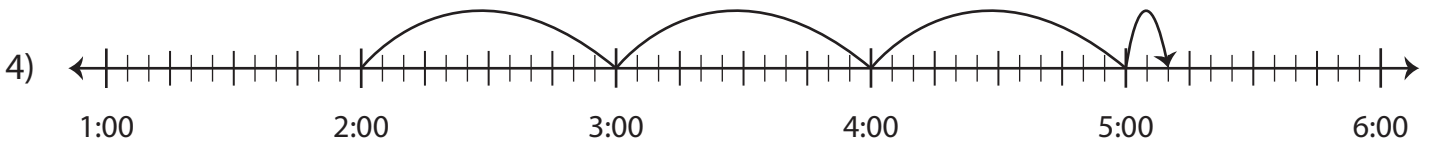
Start time	End time	Elapsed time
7:00 a.m.	9:35 a.m.	



Start time	End time	Elapsed time
9:10 p.m.	11:00 p.m.	



Start time	End time	Elapsed time
12:10 a.m.	12:35 a.m.	



Start time	End time	Elapsed time
2:00 p.m.	5:10 p.m.	

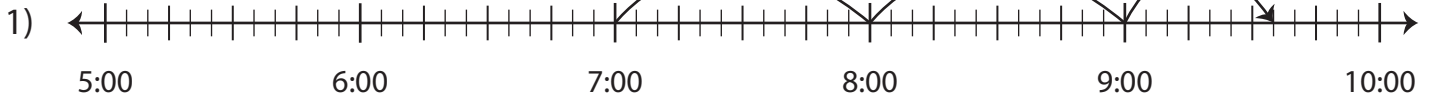
Name : \_\_\_\_\_

## Answer Key

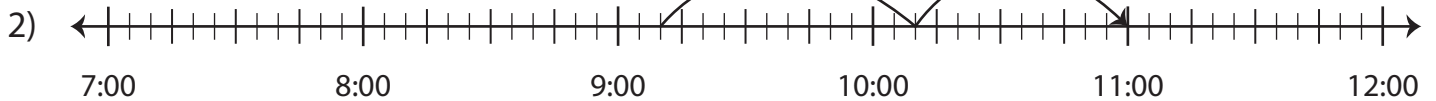
### Elapsed Time

5 minutes: L1S1

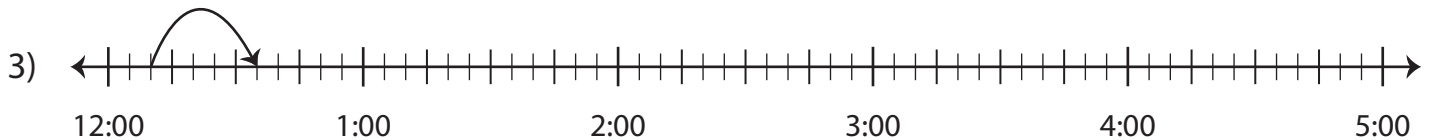
Write the elapsed time using start and end time.



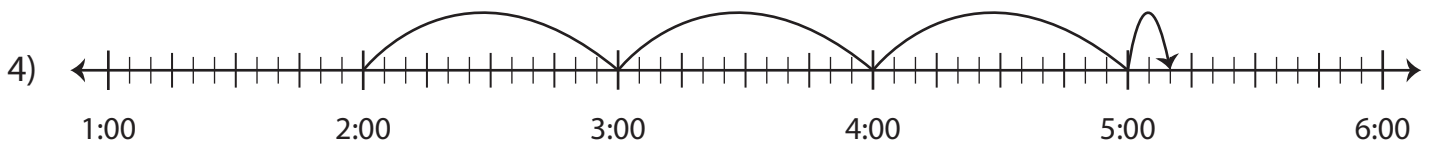
Start time	End time	Elapsed time
7:00 a.m.	9:35 a.m.	<b>2 hours and 35 minutes</b>



Start time	End time	Elapsed time
9:10 p.m.	11:00 p.m.	<b>1 hour and 50 minutes</b>



Start time	End time	Elapsed time
12:10 a.m.	12:35 a.m.	<b>25 minutes</b>



Start time	End time	Elapsed time
2:00 p.m.	5:10 p.m.	<b>3 hours and 10 minutes</b>