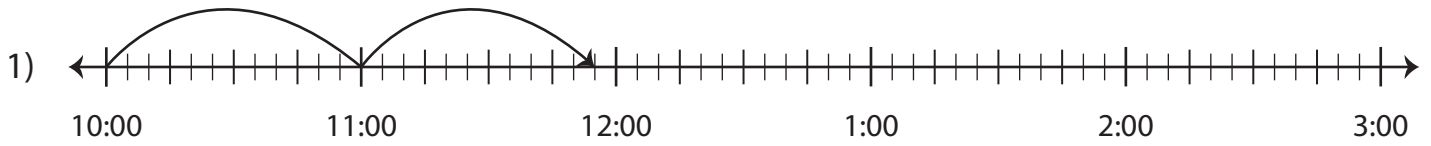


Name : _____

Elapsed Time

5 minutes: L1S2

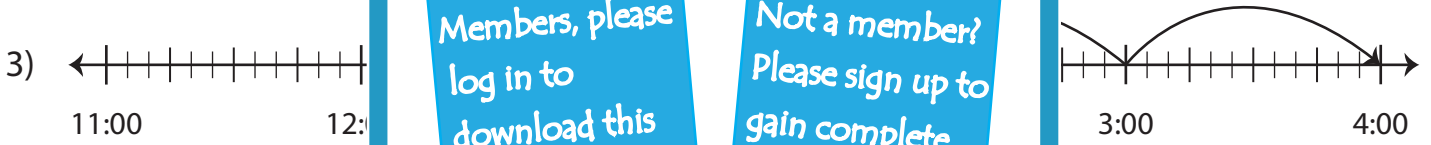
Write the elapsed time using start and end time.



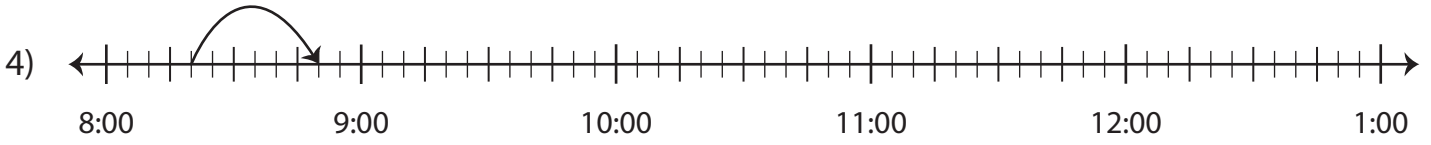
Start time	End time	Elapsed time
10:00 p.m.	11:55 p.m.	



Start time	End time	Elapsed time
3:05 a.m.		



Start time	End time	Elapsed time
1:00 p.m.		



Start time	End time	Elapsed time
8:20 a.m.	8:50 a.m.	

PREVIEW

Gain complete access to the largest collection of worksheets in all subjects!

Members, please log in to download this worksheet.

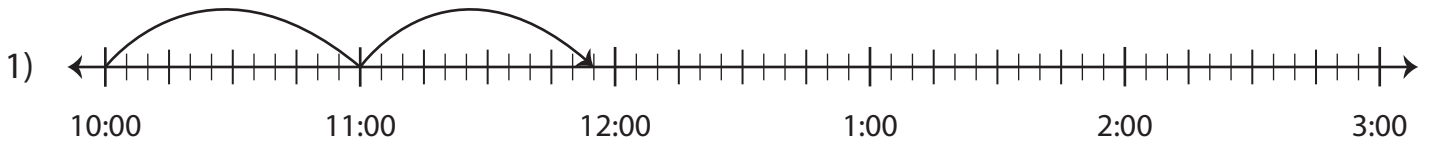
Not a member? Please sign up to gain complete access.

www.mathworksheets4kids.com

Elapsed Time

5 minutes: L1S2

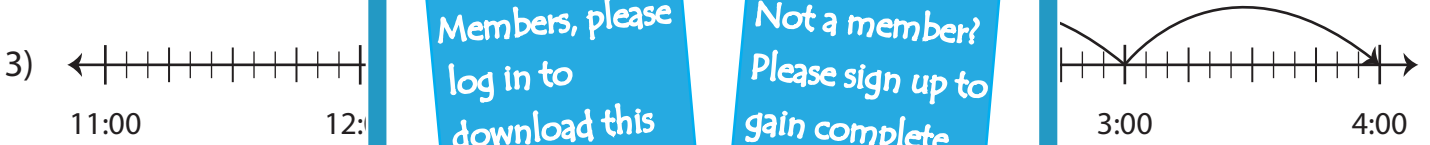
Write the elapsed time using start and end time.



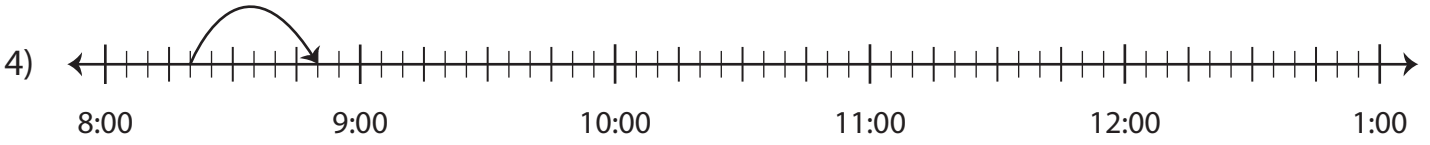
Start time	End time	Elapsed time
10:00 p.m.	11:55 p.m.	1 hour and 55 minutes



Start time	End time	Elapsed time
3:05 a.m.	3:55 a.m.	50 minutes



Start time	End time	Elapsed time
1:00 p.m.	2:00 p.m.	1 hour



Start time	End time	Elapsed time
8:20 a.m.	8:50 a.m.	30 minutes

PREVIEW

Gain complete access to the largest collection of worksheets in all subjects!

Members, please log in to download this worksheet.

Not a member? Please sign up to gain complete access.

www.mathworksheets4kids.com