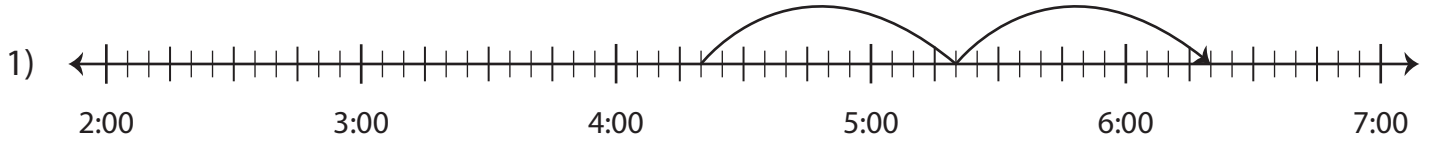


Name : _____

Elapsed Time

5 minutes: L1S3

Write the elapsed time using start and end time.



Start time	End time	Elapsed time
4:20 a.m.	6:20 a.m.	



Start time	End time	Elapsed time
11:20 p.m.		



Start time	End time	Elapsed time
9:15 a.m.		

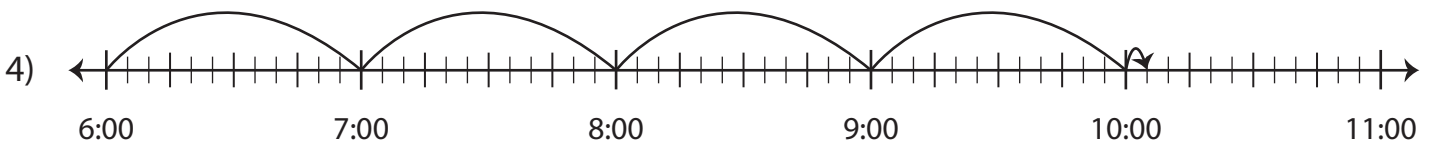
PREVIEW

Gain complete access to the largest collection of worksheets in all subjects!

Members, please log in to download this worksheet.

Not a member? Please sign up to gain complete access.

www.mathworksheets4kids.com

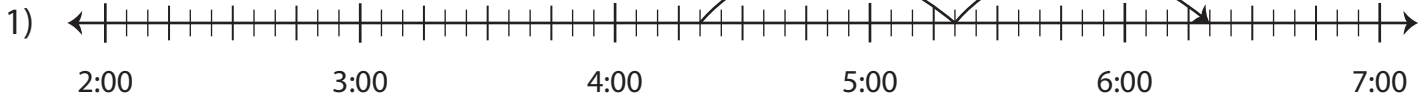


Start time	End time	Elapsed time
6:00 p.m.	10:05 p.m.	

Elapsed Time

5 minutes: L1S3

Write the elapsed time using start and end time.



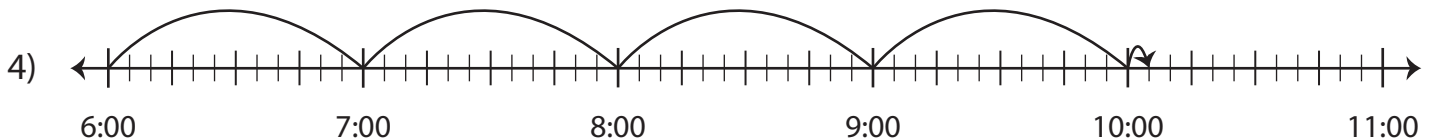
Start time	End time	Elapsed time
4:20 a.m.	6:20 a.m.	2 hours



Start time	End time	Elapsed time
11:20 p.m.		



Start time	End time	Elapsed time
9:15 a.m.		minutes



Start time	End time	Elapsed time
6:00 p.m.	10:05 p.m.	4 hours and 5 minutes

PREVIEW

Gain complete access to the largest collection of worksheets in all subjects!

Members, please log in to download this worksheet.

Not a member? Please sign up to gain complete access.

www.mathworksheets4kids.com