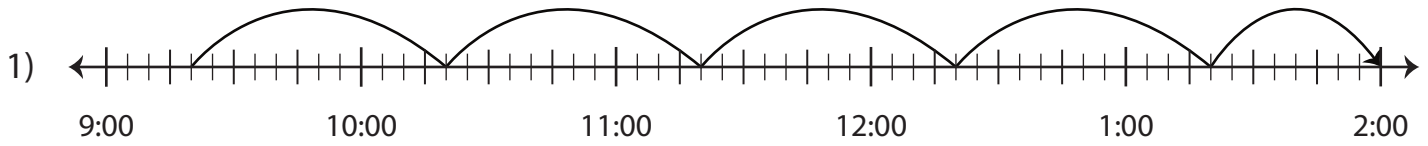


Name : _____

Elapsed Time

5 minutes: L2S1

Write the elapsed time using start and end time.



| Start time | End time | Elapsed time |
|------------|-----------|--------------|
| 9:20 a.m. | 2:00 p.m. | |



| Start time | End time | Elapsed time |
|------------|----------|--------------|
| 8:40 p.m. | | |



| Start time | End time | Elapsed time |
|------------|----------|--------------|
| 10:25 p.m. | | |

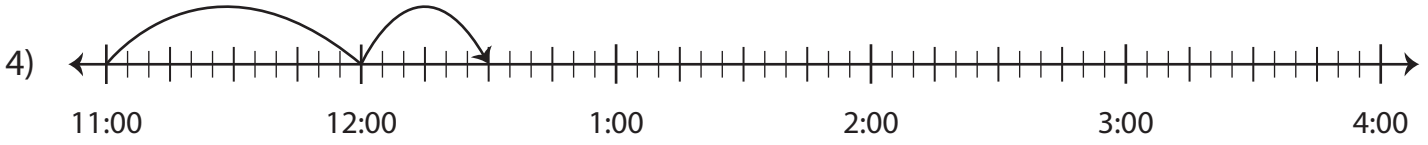
PREVIEW

Gain complete access to the largest collection of worksheets in all subjects!

Members, please log in to download this worksheet.

Not a member? Please sign up to gain complete access.

www.mathworksheets4kids.com

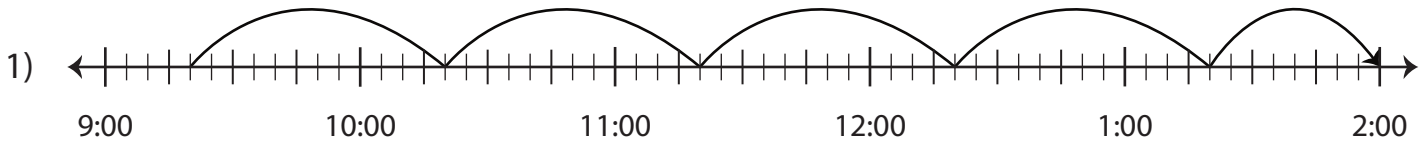


| Start time | End time | Elapsed time |
|------------|------------|--------------|
| 11:00 a.m. | 12:30 p.m. | |

Elapsed Time

5 minutes: L2S1

Write the elapsed time using start and end time.



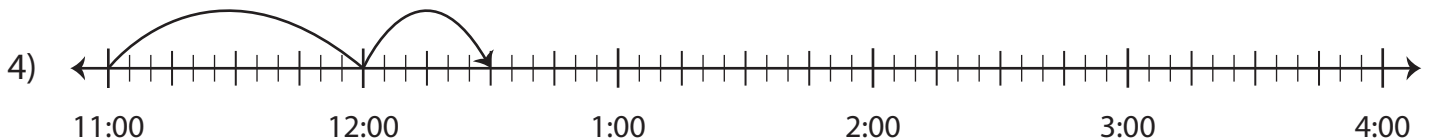
| Start time | End time | Elapsed time |
|------------|-----------|-------------------------------|
| 9:20 a.m. | 2:00 p.m. | 4 hours and 40 minutes |



| Start time | End time | Elapsed time |
|------------|-----------|-------------------|
| 8:40 p.m. | 9:20 p.m. | 40 minutes |



| Start time | End time | Elapsed time |
|------------|------------|-------------------|
| 10:25 p.m. | 11:00 p.m. | 35 minutes |



| Start time | End time | Elapsed time |
|------------|------------|------------------------------|
| 11:00 a.m. | 12:30 p.m. | 1 hour and 30 minutes |

PREVIEW

Gain complete access to the largest collection of worksheets in all subjects!

Members, please log in to download this worksheet.

Not a member? Please sign up to gain complete access.

www.mathworksheets4kids.com