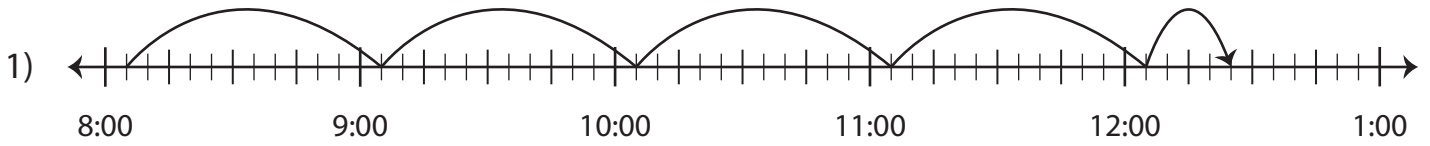


Name : \_\_\_\_\_

## Elapsed Time

5 minutes: L2S2

Write the elapsed time using start and end time.



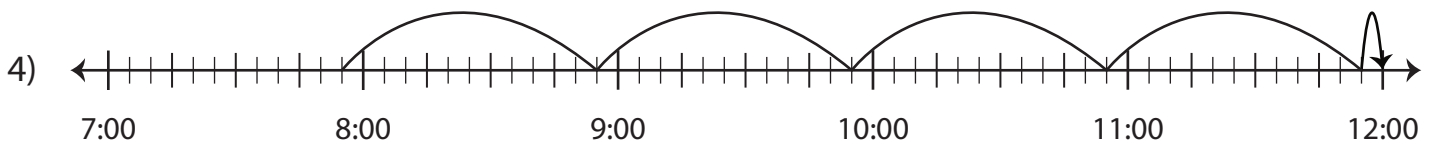
Start time	End time	Elapsed time
8:05 p.m.	12:25 a.m.	



Start time	End time	Elapsed time
10:30 a.m.		



Start time	End time	Elapsed time
11:15 a.m.		



Start time	End time	Elapsed time
7:55 p.m.	12:00 a.m.	

**PREVIEW**

Gain complete access to the largest collection of worksheets in all subjects!

Members, please log in to download this worksheet.

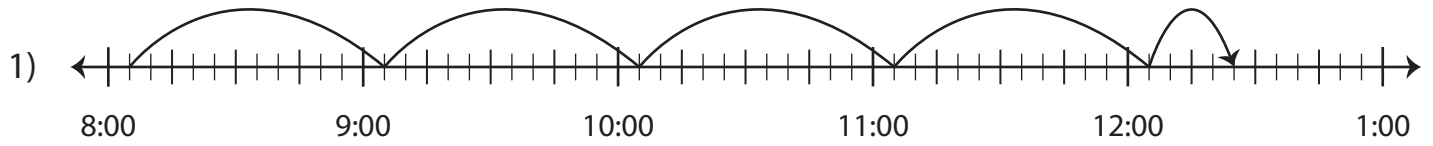
Not a member? Please sign up to gain complete access.

[www.mathworksheets4kids.com](http://www.mathworksheets4kids.com)

**Elapsed Time**

5 minutes: L2S2

Write the elapsed time using start and end time.



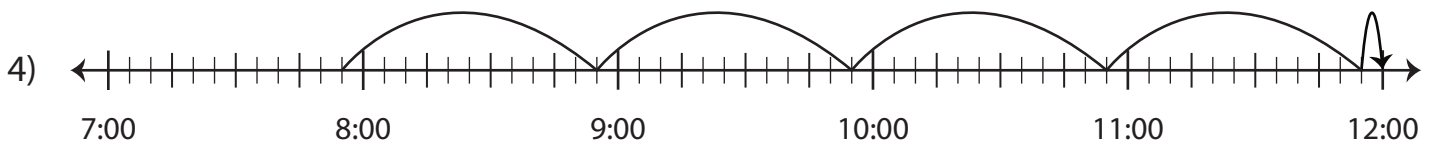
Start time	End time	Elapsed time
8:05 p.m.	12:25 a.m.	<b>4 hours and 20 minutes</b>



Start time	End time	Elapsed time
10:30 a.m.	1:00 p.m.	<b>2 hours and 30 minutes</b>



Start time	End time	Elapsed time
11:15 a.m.	12:30 p.m.	<b>1 hour and 15 minutes</b>



Start time	End time	Elapsed time
7:55 p.m.	12:00 a.m.	<b>4 hours and 5 minutes</b>

**PREVIEW**

Gain complete access to the largest collection of worksheets in all subjects!

Members, please log in to download this worksheet.

Not a member? Please sign up to gain complete access.

[www.mathworksheets4kids.com](http://www.mathworksheets4kids.com)