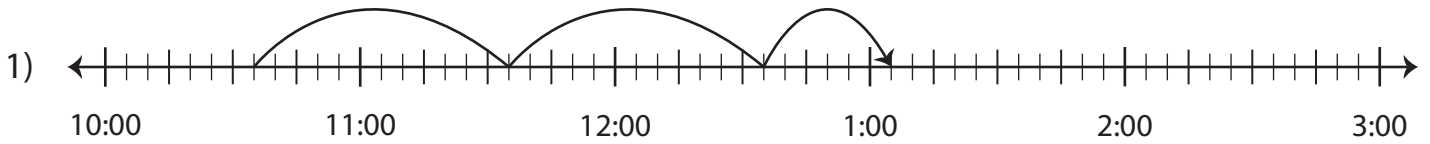


Name : \_\_\_\_\_

## Elapsed Time

5 minutes: L2S3

Write the elapsed time using start and end time.



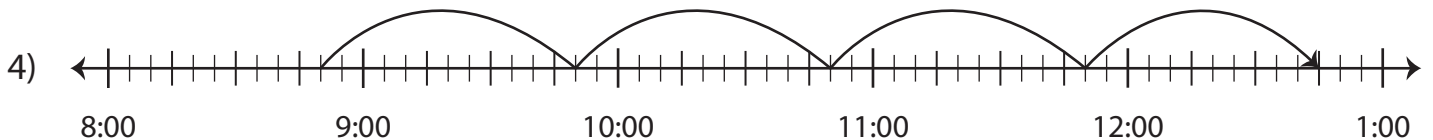
Start time	End time	Elapsed time
10:35 a.m.	1:05 p.m.	



Start time	End time	Elapsed time
11:45 p.m.		



Start time	End time	Elapsed time
9:10 a.m.		



Start time	End time	Elapsed time
8:50 p.m.	12:45 a.m.	

**PREVIEW**

Gain complete access to the largest collection of worksheets in all subjects!

Members, please log in to download this worksheet.

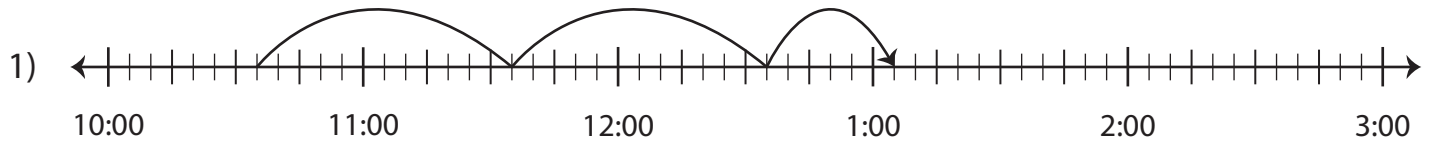
Not a member? Please sign up to gain complete access.

[www.mathworksheets4kids.com](http://www.mathworksheets4kids.com)

**Elapsed Time**

5 minutes: L2S3

Write the elapsed time using start and end time.



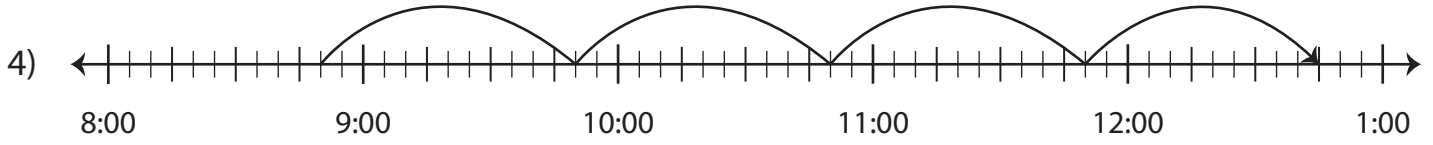
Start time	End time	Elapsed time
10:35 a.m.	1:05 p.m.	<b>2 hours and 30 minutes</b>



Start time	End time	Elapsed time
11:45 p.m.	12:15 a.m.	<b>30 minutes</b>



Start time	End time	Elapsed time
9:10 a.m.	9:40 a.m.	<b>30 minutes</b>



Start time	End time	Elapsed time
8:50 p.m.	12:45 a.m.	<b>3 hours and 55 minutes</b>

**PREVIEW**

Gain complete access to the largest collection of worksheets in all subjects!

Members, please log in to download this worksheet.

Not a member? Please sign up to gain complete access.

[www.mathworksheets4kids.com](http://www.mathworksheets4kids.com)