

Name : \_\_\_\_\_

# Telling Time


1 Minute: S1

A) Read each clock, and write the time.

1)




2)



3)




4)




B) Choose the clock

Time : 3:02



C) Choose the correct time shown by the clock.



A)

**5:59**

B)

**6:58**

C)

**11:30**

**PREVIEW**

Gain complete access to the largest collection of worksheets in all subjects!

Members, please log in to download this worksheet.

Not a member? Please sign up to gain complete access.

[www.mathworksheets4kids.com](http://www.mathworksheets4kids.com)