


Name : \_\_\_\_\_

## Telling Time

1 Minute: S3

A) Read each clock, and write the time.

1)




2)



3)



4)

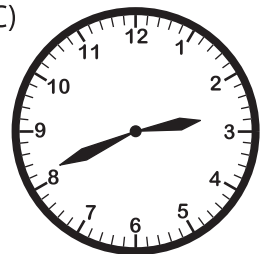


B) Choose the clock

Time : 2:38

[www.mathworksheets4kids.com](http://www.mathworksheets4kids.com)

C)



C) Choose the correct time shown by the clock.



A)

**9:59**

B)

**11:47**

C)

**10:47**