


Name : _____

Telling Time


5 minutes: S1

A) Read each clock, and write the time.

1)




2)



3)

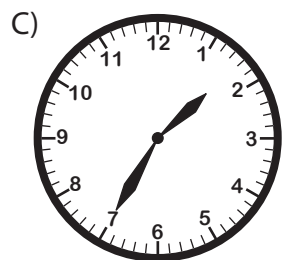


4)



B) Choose the clock

Time : 12:35



C) Choose the correct time shown by the clock.



A)

4:50

B)

10:20

C)

3:50

PREVIEW

Gain complete access to the largest collection of worksheets in all subjects!

Members, please log in to download this worksheet.

Not a member? Please sign up to gain complete access.

www.mathworksheets4kids.com


Name : _____

Telling Time

5 minutes: S1


A) Read each clock, and write the time.

1)



9:20

2)




11:40

3)




8:30

4)



2:25



12:35

PREVIEW

Gain complete access to the largest collection of worksheets in all subjects!

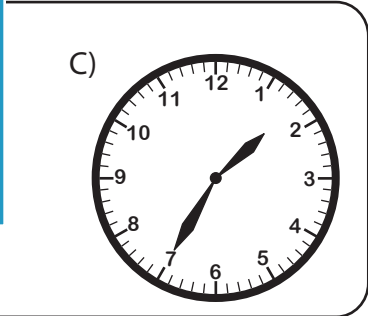
Members, please log in to download this worksheet.

Not a member? Please sign up to gain complete access.


www.mathworksheets4kids.com

B) Choose the clock

Time : 12:35



C) Choose the correct time shown by the clock.



A)

4:50

B)

10:20



3:50