

Name : \_\_\_\_\_

# Telling Time


5 minutes: S3

A) Read each clock, and write the time.


1)




2)



3)



4)




B) Choose the clock

Time : 4:05

[www.mathworksheets4kids.com](http://www.mathworksheets4kids.com)

C)



C) Choose the correct time shown by the clock.



A)

**5:15**

B)

**5:20**

C)

**4:20**


Name : \_\_\_\_\_

# Telling Time

5 minutes: S3


A) Read each clock, and write the time.

1)




12:50

2)




1:05

3)




7:25

4)



10:55



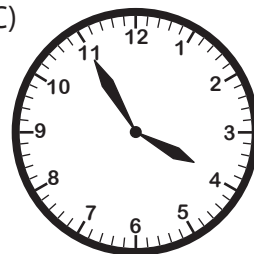
3:10

B) Choose the clock

Time : 4:05



C)



A)

5:15

B) ✓

5:20

C)

4:20

**PREVIEW**

Gain complete access to the largest collection of worksheets in all subjects!

Members, please log in to download this worksheet.

Not a member? Please sign up to gain complete access.

[www.mathworksheets4kids.com](http://www.mathworksheets4kids.com)

C) Choose the correct time shown by the clock.

