

Name : _____

Telling Time

Half-Hourly: S1

A) Read each clock, and write the time.

1)




2)



3)



4)

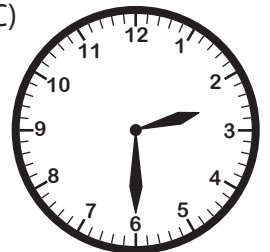


B) Choose the clock


Time : 2:30

www.mathworksheets4kids.com

C)



C) Choose the correct time shown by the clock.



A)

5:30

B)

6:30

C)

7:30


Name : _____

Telling Time

Half-Hourly: S1


A) Read each clock, and write the time.

1)




8:30

2)




6:30

3)




7:30

4)



1:30



12:30

PREVIEW

Gain complete access to the largest collection of worksheets in all subjects!


Members, please log in to download this worksheet.

Not a member? Please sign up to gain complete access.


www.mathworksheets4kids.com

B) Choose the clock

Time : 2:30



C) Choose the correct time shown by the clock.



A)

5:30

B) ✓

6:30

C)

7:30