

Name : _____

Telling Time


Hourly: S1

A) Read each clock, and write the time.

1)




2)




3)



4)



5)




6)




B) Choose the clock that shows the given time.

Time : 4:00


A)



B)



C)



C) Choose the correct time shown by the clock.



A)

12:00

B)

2:00

C)


3:00

Name : _____


Telling Time

Hourly: S1


A) Read each clock, and write the time.



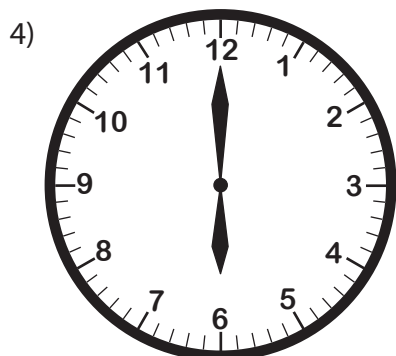
8:00




5:00




10:00



6:00



1:00



9:00

B) Choose the clock that shows the given time.

Time : 4:00	A)	B)	C)
-------------	----	----	----

C) Choose the correct time shown by the clock.



- A) **12:00** B) **2:00** C) **3:00**