

Name : _____

Telling Time


Quarterly: S1

A) Read each clock, and write the time.

1)



2)



3)



4)



5)




6)



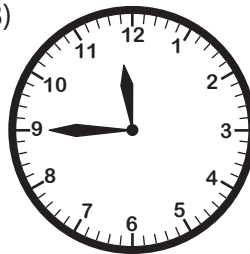
B) Choose the clock that shows the given time.

Time : 12:45

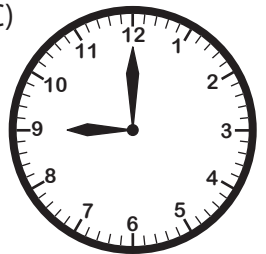
A)



B)



C)



C) Choose the correct time shown by the clock.



A)

7:15

B)

3:30

C)

6:15


Name : _____

Telling Time

Quarterly: S1


A) Read each clock, and write the time.

1)



10:45

2)




8:30

3)



2:15

4)




1:15

5)



7:45

6)



11:15


B) Choose the clock that shows the given time.

Time : 12:45

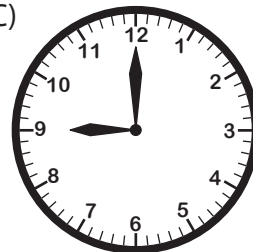
A)



B)



C)



C) Choose the correct time shown by the clock.



A)

7:15

B)

3:30

C)

6:15