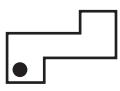
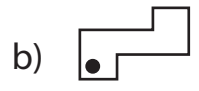



# Multiple Choice

Choose the correct image which shows the transformation of each figure.

1) Translation of  ?



2) Rotation of  ?



3) Reflection of 



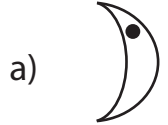
4) Translation of 




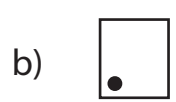
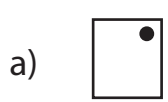
5) Rotation of 



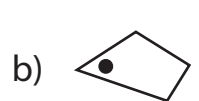
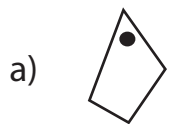
6) Reflection of 



7) Translation of  ?



8) Rotation of  ?



## PREVIEW

Gain complete access to the largest collection of worksheets in all subjects!

Members, please log in to download this worksheet.


Not a member? Please sign up to gain complete access.

[www.mathworksheets4kids.com](http://www.mathworksheets4kids.com)

**Answer key**

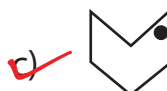
**Multiple Choice**

Choose the correct image which shows the transformation of each figure.

1) Translation of  ?



2) Rotation of  ?




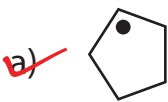
3) Reflection of  ?



4) Translation of  ?



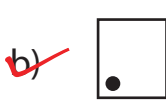
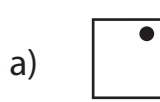
5) Rotation of  ?



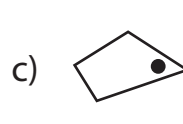
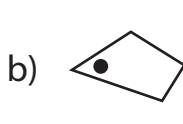

6) Reflection of  ?



7) Translation of  ?



8) Rotation of  ?



**PREVIEW**

Gain complete access to the largest collection of worksheets in all subjects!

Members, please log in to download this worksheet.

Not a member? Please sign up to gain complete access.

[www.mathworksheets4kids.com](http://www.mathworksheets4kids.com)