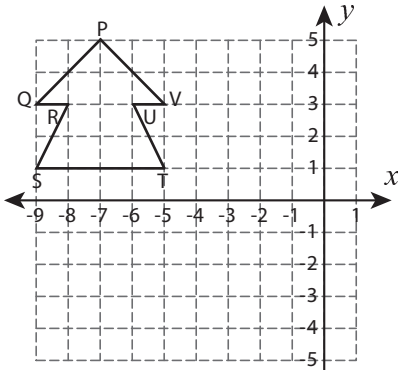


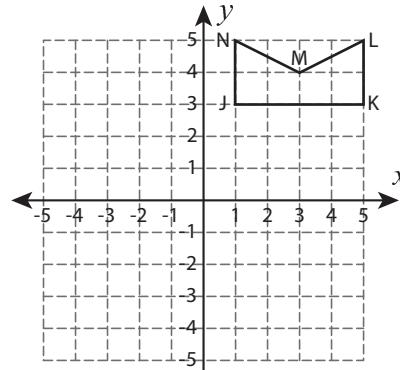
Reflect the Shapes

Graph the image of each shape after the given reflection.

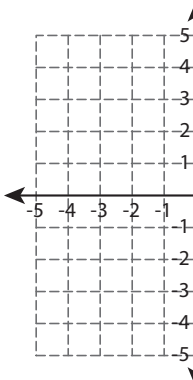
1) Reflection across the line $x = -4$



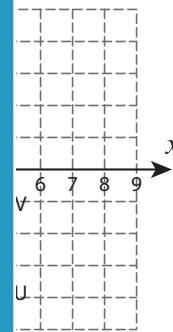
2) Reflection across the line $y = 1$



3) Reflection across



line $x = 6$



PREVIEW

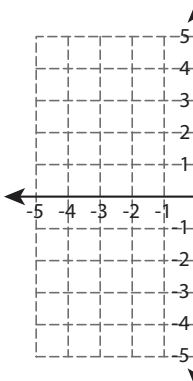
Gain complete access to the largest collection of worksheets in all subjects!

Members, please log in to download this worksheet.


Not a member? Please sign up to gain complete access.

www.mathworksheets4kids.com

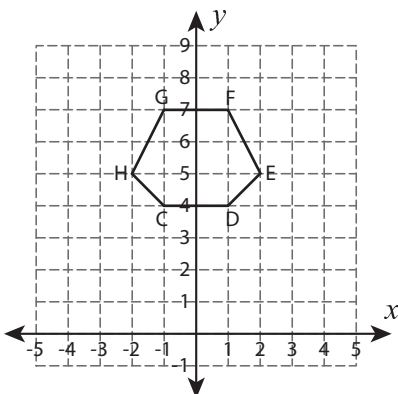
5) Reflection across



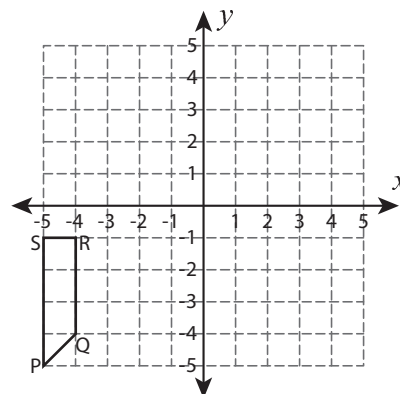
line $y = -5$



7) Reflection across the line $y = 3$



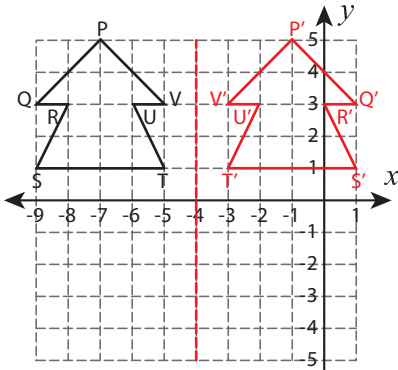
8) Reflection across the line $x = -2$



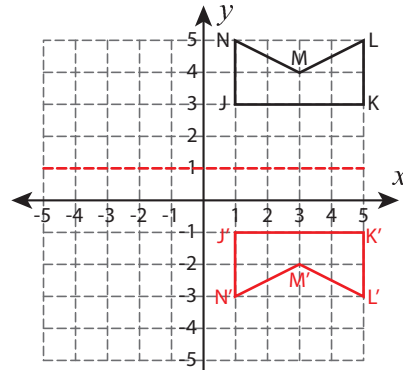
Reflect the Shapes

Graph the image of each shape after the given reflection.

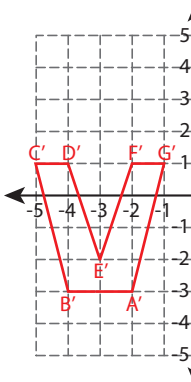
1) Reflection across the line $x = -4$



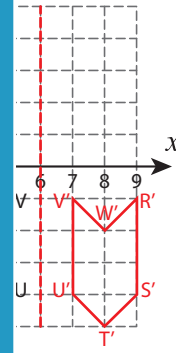
2) Reflection across the line $y = 1$



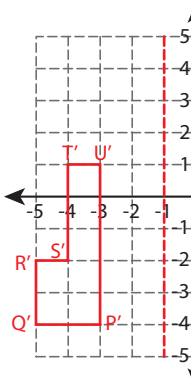
3) Reflection across



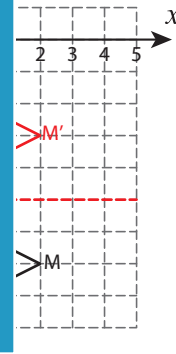
line $x = 6$



5) Reflection across



line $y = -5$



PREVIEW

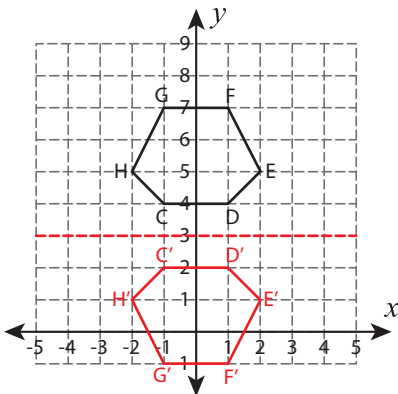
Gain complete access to the largest collection of worksheets in all subjects!

Members, please log in to download this worksheet.

Not a member? Please sign up to gain complete access.

www.mathworksheets4kids.com

7) Reflection across the line $y = 3$



8) Reflection across the line $x = -2$

