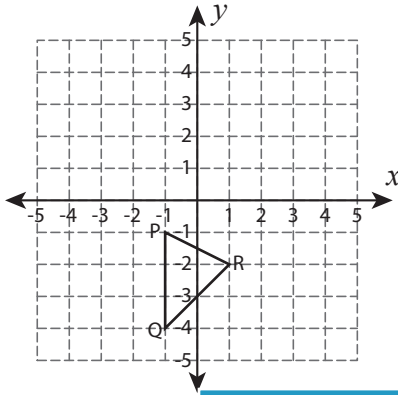


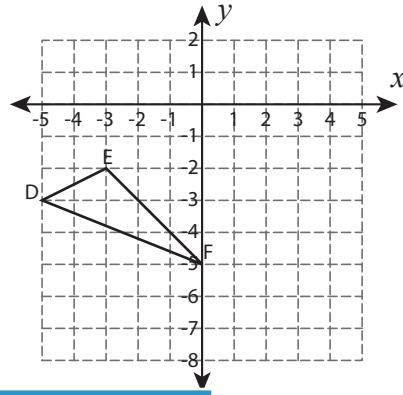
Reflect the Triangles

Graph the image of each triangle after the given reflection.

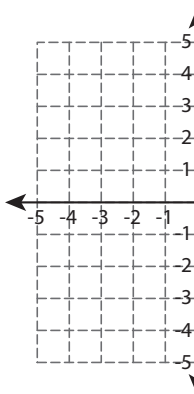
1) Reflection across the line $x = 2$



2) Reflection across the line $y = -5$



3) Reflection across



PREVIEW

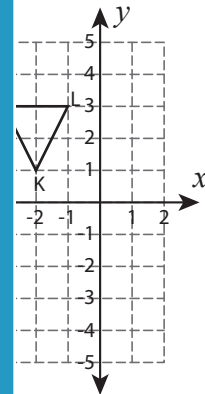
Gain complete access to the largest collection of worksheets in all subjects!

Members, please log in to download this worksheet.

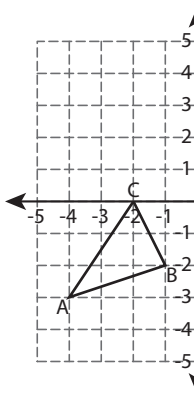
Not a member? Please sign up to gain complete access.

www.mathworksheets4kids.com

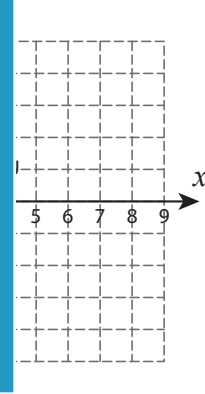
the line $x = -4$



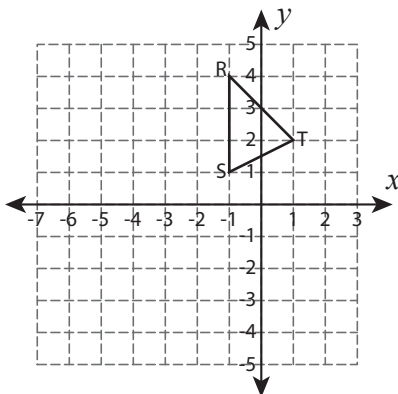
5) Reflection across



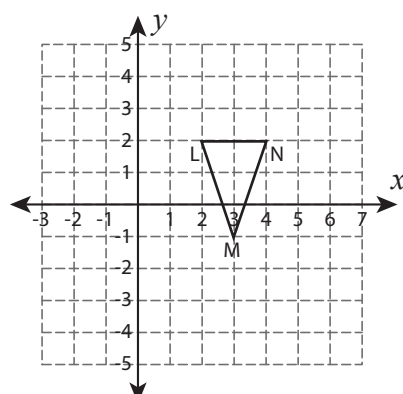
the line $x = 5$



7) Reflection across the line $x = -3$



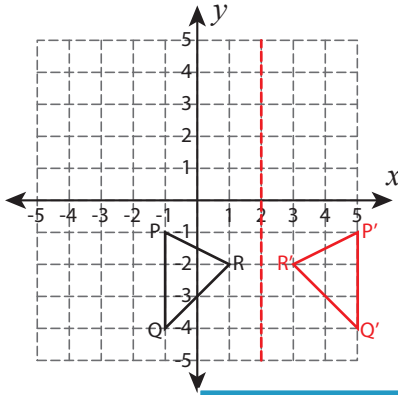
8) Reflection across the line $y = 2$



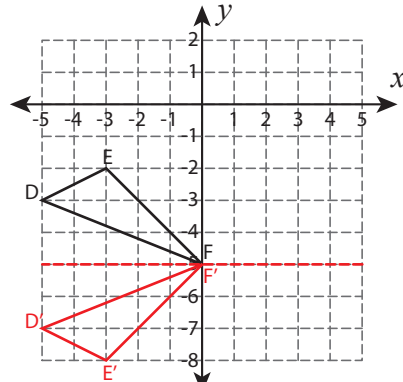
Reflect the Triangles

Graph the image of each triangle after the given reflection.

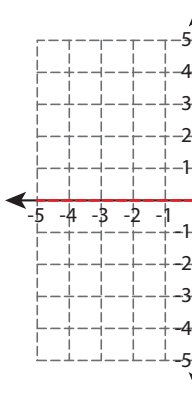
1) Reflection across the line $x = 2$



2) Reflection across the line $y = -5$



3) Reflection across



PREVIEW

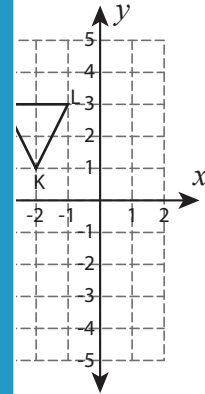
Gain complete access to the largest collection of worksheets in all subjects!

Members, please log in to download this worksheet.

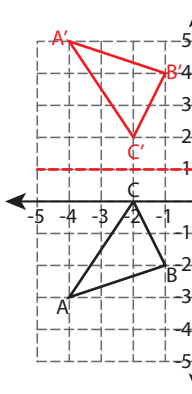
Not a member? Please sign up to gain complete access.

www.mathworksheets4kids.com

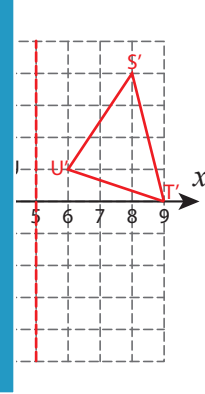
the line $x = -4$



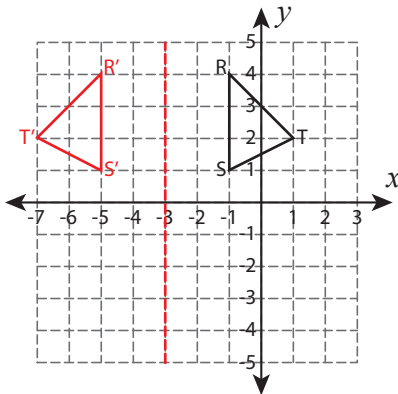
5) Reflection across



the line $x = 5$



7) Reflection across the line $x = -3$



8) Reflection across the line $y = 2$

